



Math worksheet on 'Time - Elapsed Negative - Time and Hours & Minutes to Clock - Five Minutes (Level 3)'. Part of a broader unit on 'Time - Elapsed Time, Negative - Advanced'

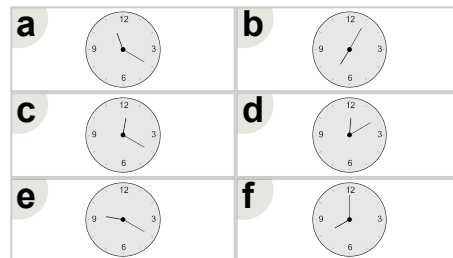
Learn online: app.mobius.academy/math/units/time_elapsed_negative_advanced/

1

What will the time be after the given change?

9:15

Subtract 1 hr 15 mins

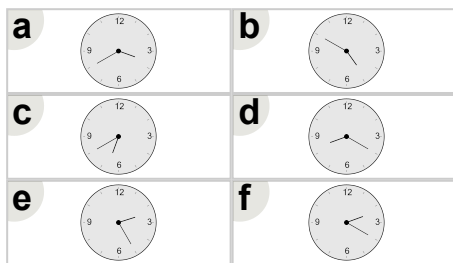


2

What will the time be after the given change?

7:20

Subtract 40 mins

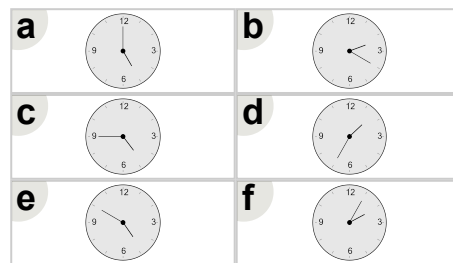


3

What will the time be after the given change?

4:55

Subtract 10 mins

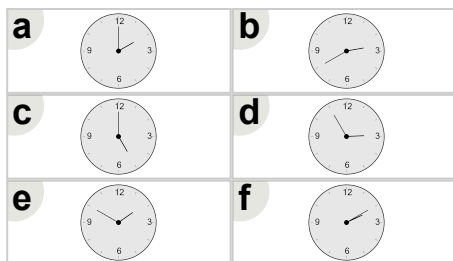


4

What will the time be after the given change?

3:10

Subtract 1 hr 20 mins

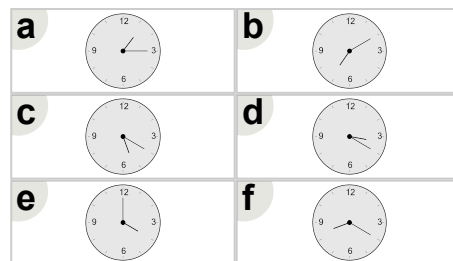


5

What will the time be after the given change?

4:50

Subtract 50 mins

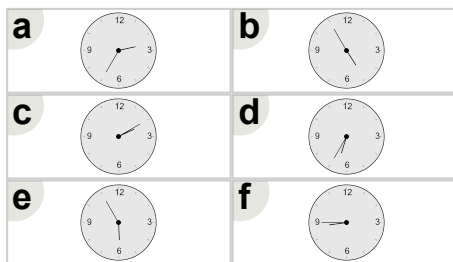


6

What will the time be after the given change?

6:45

Subtract 1 hr 50 mins



7

What will the time be after the given change?

2:05

Subtract 5 mins

