



Math worksheet on 'Time - Elapsed Negative - Time and Hours & Minutes to Clock - Full Hours (Level 2)'.  
Part of a broader unit on 'Time - Elapsed Time, Negative - Intro'

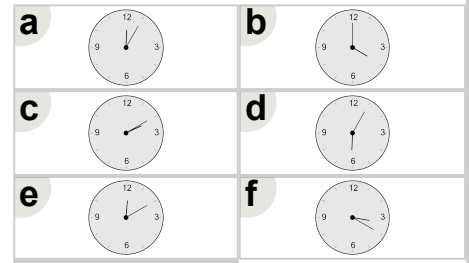
Learn online: [app.mobius.academy/math/units/time\\_elapsed\\_negative\\_intro/](http://app.mobius.academy/math/units/time_elapsed_negative_intro/)

1

What will the time be after the given change?

6:00

Subtract 2 hrs

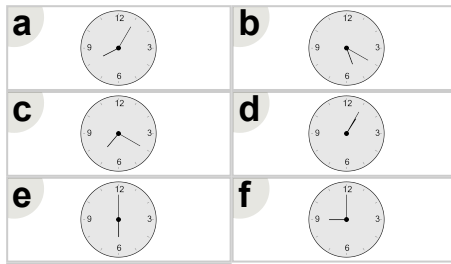


2

What will the time be after the given change?

8:00

Subtract 2 hrs

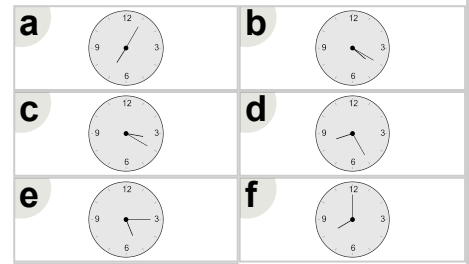


3

What will the time be after the given change?

10:00

Subtract 2 hrs

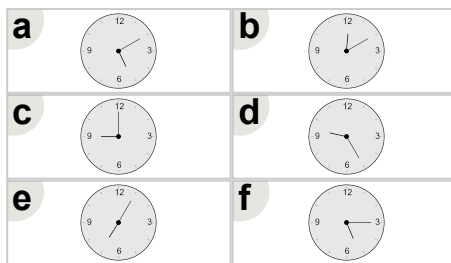


4

What will the time be after the given change?

12:00

Subtract 3 hrs

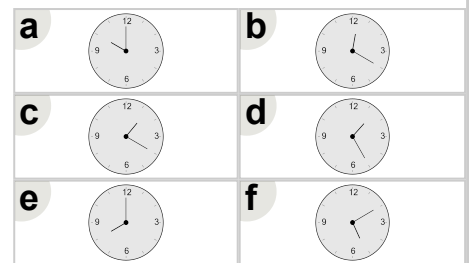


5

What will the time be after the given change?

12:00

Subtract 2 hrs

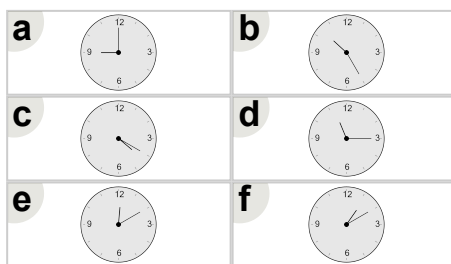


6

What will the time be after the given change?

11:00

Subtract 2 hrs



7

What will the time be after the given change?

7:00

Subtract 1 hr

