





Math worksheet on 'Time - Elapsed - Two Clocks To Hours & Minutes - Five Minutes (Level 1)'. Part of a broader unit on 'Time - Elapsed Time - Advanced'


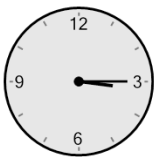
Learn online: [app.mobius.academy/math/units/time\\_elapsed\\_advanced/](http://app.mobius.academy/math/units/time_elapsed_advanced/)

**1** How many hours and minutes later is the second clock?



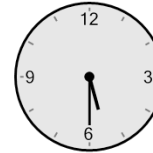

- a** 45 mins
- b** 30 mins
- c** 1 hr 15 mins
- d** 0 hr
- e** 15 mins
- f** 2 hrs

**2** How many hours and minutes later is the second clock?





- a** 55 mins
- b** 1 hr 10 mins
- c** 35 mins
- d** 50 mins
- e** 1 hr 50 mins
- f** 2 hrs 20 mins

**3** How many hours and minutes later is the second clock?




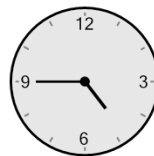
- |                      |                  |
|----------------------|------------------|
| <b>a</b> 1 hr 5 mins | <b>b</b> 50 mins |
| <b>c</b> 25 mins     | <b>d</b> 10 mins |
| <b>e</b> 20 mins     | <b>f</b> 35 mins |

**4** How many hours and minutes later is the second clock?




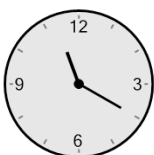
- a** 2 hrs 15 mins
- b** 45 mins
- c** 30 mins
- d** 2 hrs 30 mins
- e** 1 hr 30 mins
- f** 2 hrs

**5** How many hours and minutes later is the second clock?





- a** 1 hr 40 mins
- b** 5 mins
- c** 1 hr 10 mins
- d** 25 mins
- e** 50 mins
- f** 40 mins

**6** How many hours and minutes later is the second clock?



- a** 35 mins
- b** 55 mins
- c** 25 mins
- d** 1 hr 10 mins
- e** 5 mins
- f** 20 mins

**7** How many hours and minutes later is the second clock?



- a** 15 mins
- b** 30 mins
- c** 1 hr 15 mins
- d** 1 hr 30 mins
- e** 0 hr
- f** 1 hr