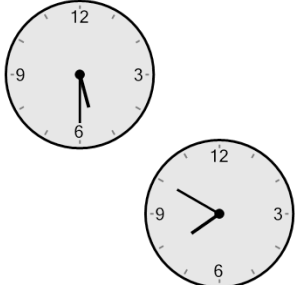




Math worksheet on 'Time - Elapsed - Two Clocks To Hours & Minutes - Five Minutes (Level 3)'. Part of a broader unit on 'Time - Elapsed Time - Advanced'

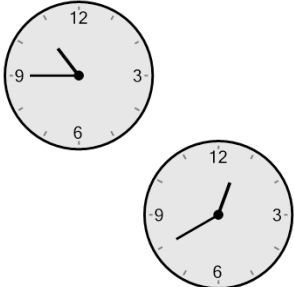
Learn online: app.mobius.academy/math/units/time_elapsed_advanced/

1 How many hours and minutes later is the second clock?



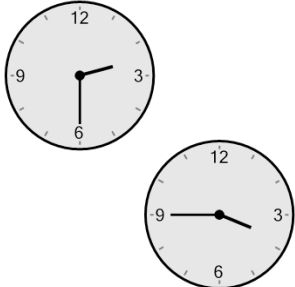
a	2 hrs 50 mins
b	50 mins
c	2 hrs 35 mins
d	1 hr 20 mins
e	2 hrs 20 mins
f	2 hrs 5 mins

2 How many hours and minutes later is the second clock?




a	40 mins
b	3 hrs 40 mins
c	1 hr 10 mins
d	1 hr 55 mins
e	1 hr 40 mins
f	2 hrs 10 mins

3 How many hours and minutes later is the second clock?



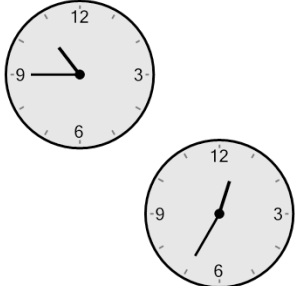
a	2 hrs 30 mins
b	1 hr
c	2 hrs 45 mins
d	3 hrs
e	15 mins
f	1 hr 15 mins

4 How many hours and minutes later is the second clock?



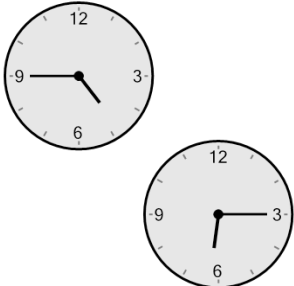
a	0 hr
b	2 hrs 15 mins
c	1 hr 15 mins
d	15 mins
e	2 hrs
f	30 mins

5 How many hours and minutes later is the second clock?



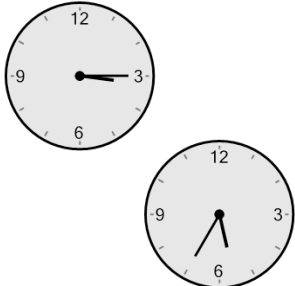
a	1 hr 50 mins
b	2 hrs 5 mins
c	50 mins
d	3 hrs 20 mins
e	5 mins
f	1 hr 5 mins

6 How many hours and minutes later is the second clock?



a	3 hrs 30 mins
b	2 hrs 45 mins
c	1 hr 30 mins
d	1 hr 45 mins
e	3 hrs
f	1 hr

7 How many hours and minutes later is the second clock?



a	3 hrs 50 mins
b	2 hrs 50 mins
c	2 hrs 20 mins
d	2 hrs 5 mins
e	3 hrs 35 mins
f	1 hr 5 mins