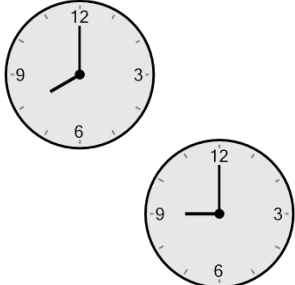




Math worksheet on 'Time - Elapsed - Two Clocks To Hours & Minutes - Full Hours (Level 1)'. Part of a broader unit on 'Time - Elapsed Time - Basics'


Learn online: [app.mobius.academy/math/units/time\\_elapsed\\_basics/](http://app.mobius.academy/math/units/time_elapsed_basics/)

**1** How many hours and minutes later is the second clock?



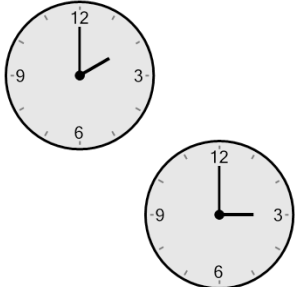
<b>a</b> 2 hrs	<b>b</b> 30 mins
<b>c</b> 1 hr	<b>d</b> 45 mins
<b>e</b> 3 hrs	<b>f</b> 0 hr

**2** How many hours and minutes later is the second clock?



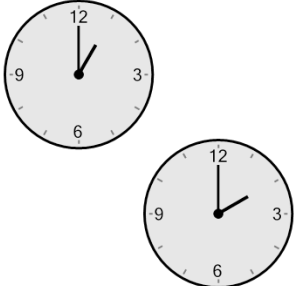
<b>a</b> 2 hrs 45 mins
<b>b</b> 3 hrs
<b>c</b> 30 mins
<b>d</b> 0 hr
<b>e</b> 2 hrs 30 mins
<b>f</b> 1 hr

**3** How many hours and minutes later is the second clock?



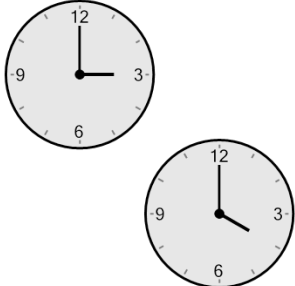
<b>a</b> 15 mins	
<b>b</b> 1 hr	
<b>c</b> 1 hr 45 mins	
<b>d</b> 1 hr 30 mins	
<b>e</b> 3 hrs	
<b>f</b> 2 hrs	

**4** How many hours and minutes later is the second clock?



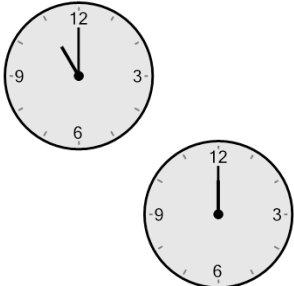
<b>a</b> 1 hr
<b>b</b> 3 hrs
<b>c</b> 2 hrs 30 mins
<b>d</b> 45 mins
<b>e</b> 0 hr
<b>f</b> 2 hrs

**5** How many hours and minutes later is the second clock?



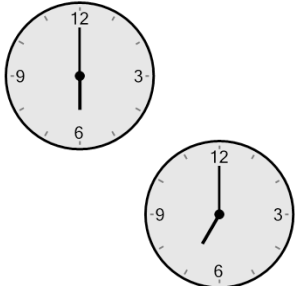
<b>a</b> 1 hr 15 mins	
<b>b</b> 1 hr	
<b>c</b> 3 hrs	
<b>d</b> 2 hrs	
<b>e</b> 2 hrs 30 mins	
<b>f</b> 30 mins	

**6** How many hours and minutes later is the second clock?



<b>a</b> 1 hr 45 mins
<b>b</b> 2 hrs 30 mins
<b>c</b> 45 mins
<b>d</b> 1 hr
<b>e</b> 3 hrs
<b>f</b> 0 hr

**7** How many hours and minutes later is the second clock?



<b>a</b> 1 hr 15 mins	
<b>b</b> 15 mins	
<b>c</b> 3 hrs	
<b>d</b> 1 hr	
<b>e</b> 2 hrs	
<b>f</b> 0 hr	