




Math worksheet on 'Time - Elapsed - Two Clocks To Hours & Minutes - Full Hours (Level 3)'. Part of a broader unit on 'Time - Elapsed Time - Practice'


Learn online: app.mobius.academy/math/units/time_elapsed_practice/

1 How many hours and minutes later is the second clock?



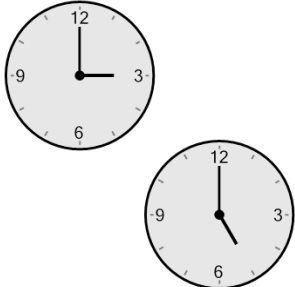
a	2 hrs
b	4 hrs 30 mins
c	5 hrs
d	4 hrs
e	0 hr
f	3 hrs

2 How many hours and minutes later is the second clock?




a	4 hrs
b	2 hrs
c	1 hr 45 mins
d	3 hrs 45 mins
e	1 hr 30 mins
f	1 hr

3 How many hours and minutes later is the second clock?



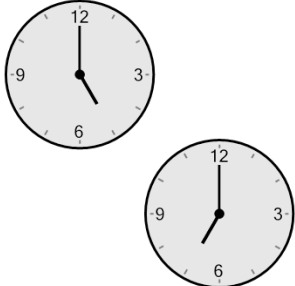
a	0 hr
b	1 hr
c	2 hrs
d	3 hrs
e	3 hrs 15 mins
f	1 hr 30 mins

4 How many hours and minutes later is the second clock?



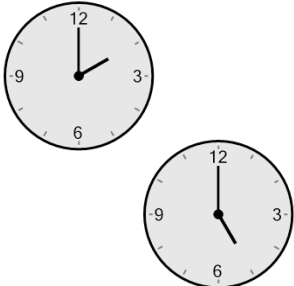
a	3 hrs
b	1 hr
c	5 hrs
d	4 hrs 15 mins
e	0 hr
f	4 hrs

5 How many hours and minutes later is the second clock?



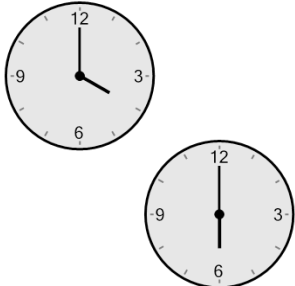
a	1 hr 15 mins
b	0 hr
c	2 hrs 30 mins
d	1 hr
e	2 hrs
f	3 hrs

6 How many hours and minutes later is the second clock?



a	2 hrs 30 mins
b	4 hrs 45 mins
c	3 hrs 15 mins
d	2 hrs 15 mins
e	1 hr
f	3 hrs

7 How many hours and minutes later is the second clock?



a	0 hr
b	2 hrs
c	1 hr
d	4 hrs
e	3 hrs
f	3 hrs 45 mins