




Math worksheet on 'Time - Elapsed - Two Clocks To Hours & Minutes - One Minutes (Level 1)'. Part of a broader unit on 'Time - Elapsed Time - Advanced'

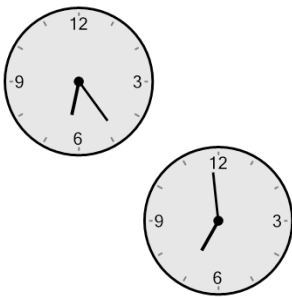
Learn online: [app.mobius.academy/math/units/time\\_elapsed\\_advanced/](http://app.mobius.academy/math/units/time_elapsed_advanced/)

**1** How many hours and minutes later is the second clock?




- a** 42 mins
- b** 3 mins
- c** 27 mins
- d** 1 hr 12 mins
- e** 1 hr 42 mins
- f** 1 hr 27 mins

**2** How many hours and minutes later is the second clock?



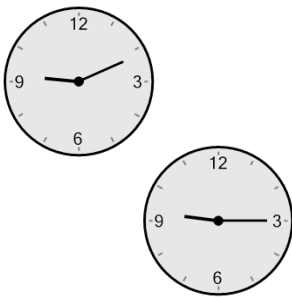
- a** 1 hr 35 mins
- b** 35 mins
- c** 25 mins
- d** 1 hr 5 mins
- e** 1 hr 50 mins
- f** 2 hrs 20 mins

**3** How many hours and minutes later is the second clock?



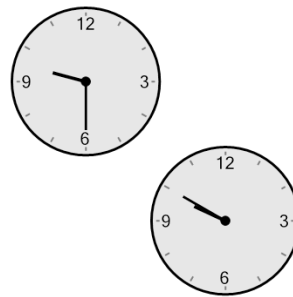
- a** 1 hr 20 mins
- b** 5 mins
- c** 1 hr 40 mins
- d** 40 mins
- e** 1 hr 10 mins
- f** 1 hr 5 mins

**4** How many hours and minutes later is the second clock?



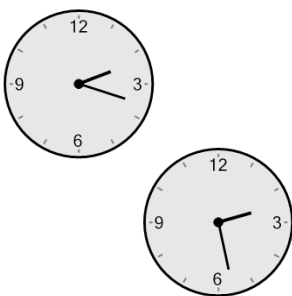
- a** 19 mins
- b** 4 mins
- c** 1 hr 41 mins
- d** 26 mins
- e** 1 hr 49 mins
- f** 34 mins

**5** How many hours and minutes later is the second clock?




- a** 40 mins
- b** 35 mins
- c** 20 mins
- d** 1 hr 20 mins
- e** 55 mins
- f** 1 hr 35 mins

**6** How many hours and minutes later is the second clock?



- a** 40 mins
- b** 1 hr 55 mins
- c** 5 mins
- d** 1 hr 5 mins
- e** 10 mins
- f** 1 hr 40 mins

**7** How many hours and minutes later is the second clock?



- a** 1 hr 11 mins
- b** 1 hr 41 mins
- c** 1 hr 4 mins
- d** 41 mins
- e** 4 mins
- f** 49 mins