




Math worksheet on 'Time - Elapsed - Two Clocks To Hours & Minutes - One Minutes (Level 2)'. Part of a broader unit on 'Time - Elapsed Time - Advanced'


Learn online: app.mobius.academy/math/units/time_elapsed_advanced/

1 How many hours and minutes later is the second clock?



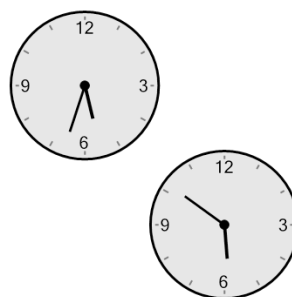
- a** 1 hr 55 mins
- b** 1 hr 20 mins
- c** 50 mins
- d** 40 mins
- e** 1 hr 40 mins
- f** 25 mins

2 How many hours and minutes later is the second clock?




- a** 26 mins
- b** 1 hr 56 mins
- c** 1 hr 41 mins
- d** 2 hrs 11 mins
- e** 56 mins
- f** 1 hr 11 mins

3 How many hours and minutes later is the second clock?




- a** 18 mins
- b** 1 hr 3 mins
- c** 3 mins
- d** 1 hr 12 mins
- e** 1 hr 48 mins
- f** 48 mins

4 How many hours and minutes later is the second clock?




- a** 1 hr 18 mins
- b** 18 mins
- c** 33 mins
- d** 1 hr 12 mins
- e** 1 hr 33 mins
- f** 3 mins

5 How many hours and minutes later is the second clock?




- a** 59 mins
- b** 2 hrs 29 mins
- c** 14 mins
- d** 1 hr 29 mins
- e** 1 hr 59 mins
- f** 2 hrs 14 mins

6 How many hours and minutes later is the second clock?



- a** 0 hr
- b** 1 hr 30 mins
- c** 1 hr
- d** 2 hrs
- e** 30 mins
- f** 1 hr 15 mins

7 How many hours and minutes later is the second clock?



- a** 1 hr 24 mins
- b** 1 hr 6 mins
- c** 9 mins
- d** 24 mins
- e** 21 mins
- f** 36 mins