




Math worksheet on 'Time - Elapsed - Two Clocks To Hours & Minutes - One Minutes (Level 3)'. Part of a broader unit on 'Time - Elapsed Time - Advanced'

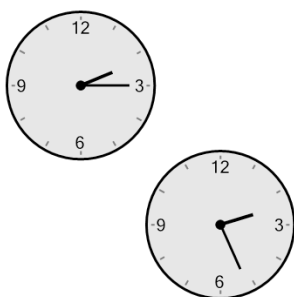
Learn online: [app.mobius.academy/math/units/time\\_elapsed\\_advanced/](http://app.mobius.academy/math/units/time_elapsed_advanced/)

**1** How many hours and minutes later is the second clock?




- a** 37 mins
- b** 8 mins
- c** 2 hrs 7 mins
- d** 22 mins
- e** 7 mins
- f** 52 mins

**2** How many hours and minutes later is the second clock?




- a** 1 hr 4 mins
- b** 1 hr 41 mins
- c** 1 hr 11 mins
- d** 56 mins
- e** 1 hr 56 mins
- f** 11 mins

**3** How many hours and minutes later is the second clock?




- a** 41 mins
- b** 11 mins
- c** 1 hr 41 mins
- d** 26 mins
- e** 1 hr 26 mins
- f** 49 mins

**4** How many hours and minutes later is the second clock?



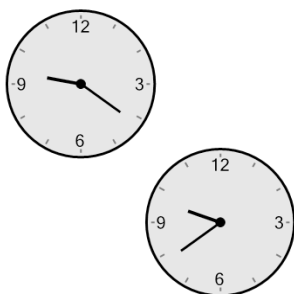
- a** 51 mins
- b** 1 hr 24 mins
- c** 54 mins
- d** 6 mins
- e** 1 hr 39 mins
- f** 24 mins

**5** How many hours and minutes later is the second clock?




- a** 2 hrs 59 mins
- b** 29 mins
- c** 44 mins
- d** 2 hrs 44 mins
- e** 2 hrs 14 mins
- f** 1 hr 29 mins

**6** How many hours and minutes later is the second clock?



- a** 1 hr 27 mins
- b** 1 hr 48 mins
- c** 18 mins
- d** 42 mins
- e** 48 mins
- f** 1 hr 18 mins

**7** How many hours and minutes later is the second clock?



- a** 1 hr 7 mins
- b** 1 hr 37 mins
- c** 37 mins
- d** 2 hrs 7 mins
- e** 2 hrs 22 mins
- f** 1 hr 22 mins