




Math worksheet on 'Time - Elapsed - Two Clocks To Hours & Minutes - Quarter Hours (Level 1)'. Part of a broader unit on 'Time - Elapsed Time - Basics'

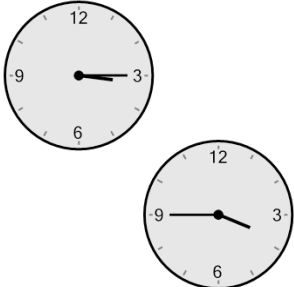
Learn online: app.mobius.academy/math/units/time_elapsed_basics/

1 How many hours and minutes later is the second clock?



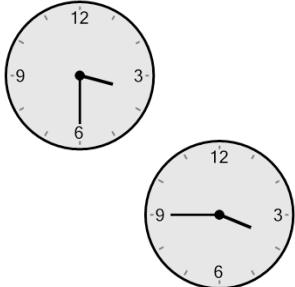
a	15 mins
b	1 hr 15 mins
c	30 mins
d	1 hr
e	1 hr 30 mins
f	2 hrs

2 How many hours and minutes later is the second clock?



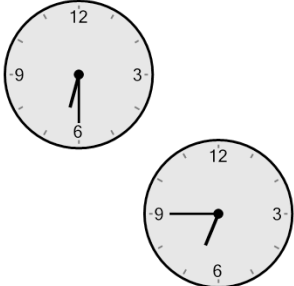
a	2 hrs
b	1 hr 45 mins
c	1 hr 30 mins
d	15 mins
e	1 hr
f	30 mins

3 How many hours and minutes later is the second clock?



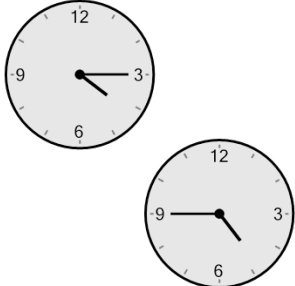
a	1 hr 15 mins
b	2 hrs
c	45 mins
d	15 mins
e	0 hr
f	1 hr 30 mins

4 How many hours and minutes later is the second clock?



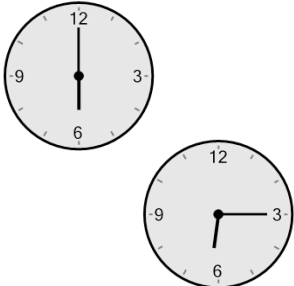
a	30 mins
b	1 hr 15 mins
c	45 mins
d	1 hr 45 mins
e	15 mins
f	1 hr

5 How many hours and minutes later is the second clock?



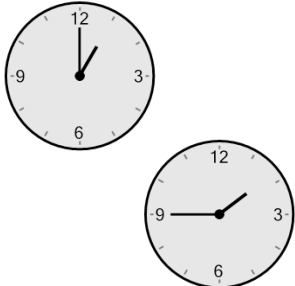
a	2 hrs
b	2 hrs 30 mins
c	45 mins
d	30 mins
e	1 hr 45 mins
f	1 hr

6 How many hours and minutes later is the second clock?



a	15 mins
b	1 hr 30 mins
c	1 hr 45 mins
d	1 hr 15 mins
e	30 mins
f	0 hr

7 How many hours and minutes later is the second clock?



a	0 hr
b	1 hr
c	2 hrs 30 mins
d	30 mins
e	45 mins
f	2 hrs 15 mins