





Math worksheet on 'Time - Elapsed - Two Clocks To Hours & Minutes - Quarter Hours (Level 2)'. Part of a broader unit on 'Time - Elapsed Time - Advanced'


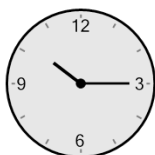
Learn online: app.mobius.academy/math/units/time_elapsed_advanced/

1 How many hours and minutes later is the second clock?





- a** 18 mins
- b** 2 hrs 18 mins
- c** 33 mins
- d** 2 hrs 33 mins
- e** 27 mins
- f** 1 hr 3 mins

2 How many hours and minutes later is the second clock?



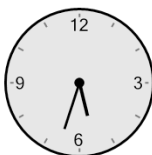
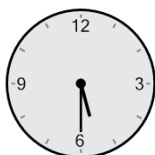
- a** 59 mins
- b** 1 min
- c** 1 hr 31 mins
- d** 46 mins
- e** 44 mins
- f** 1 hr 14 mins

3 How many hours and minutes later is the second clock?




- a** 1 hr 14 mins
- b** 29 mins
- c** 1 hr 31 mins
- d** 44 mins
- e** 14 mins
- f** 1 min

4 How many hours and minutes later is the second clock?




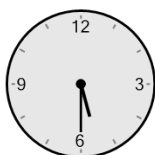
- a** 12 mins
- b** 42 mins
- c** 18 mins
- d** 3 mins
- e** 48 mins
- f** 1 hr 33 mins

5 How many hours and minutes later is the second clock?



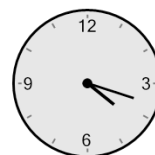
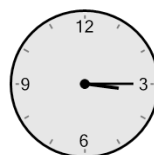
- a** 2 hrs 31 mins
- b** 1 hr 46 mins
- c** 1 hr 1 min
- d** 2 hrs 1 min
- e** 16 mins
- f** 1 min

6 How many hours and minutes later is the second clock?



- a** 2 hrs 48 mins
- b** 1 hr 33 mins
- c** 1 hr 18 mins
- d** 33 mins
- e** 1 hr 3 mins
- f** 12 mins

7 How many hours and minutes later is the second clock?



- a** 1 hr 33 mins
- b** 3 mins
- c** 18 mins
- d** 1 hr 3 mins
- e** 1 hr 18 mins
- f** 33 mins