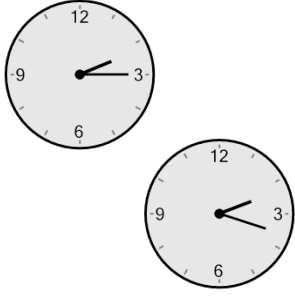




Math worksheet on 'Time - Elapsed - Two Clocks To Hours & Minutes - Quarter Hours (Level 3)'. Part of a broader unit on 'Time - Elapsed Time - Advanced'

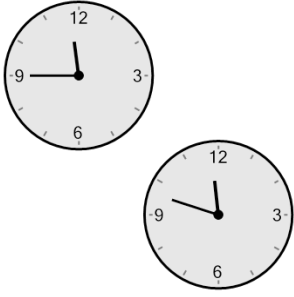
Learn online: app.mobius.academy/math/units/time_elapsed_advanced/

1 How many hours and minutes later is the second clock?



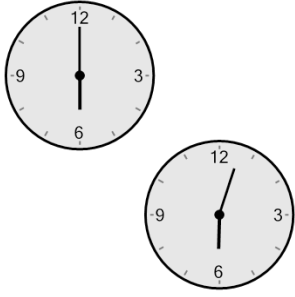
a	1 hr 27 mins
b	18 mins
c	3 mins
d	27 mins
e	48 mins
f	1 hr 18 mins

2 How many hours and minutes later is the second clock?



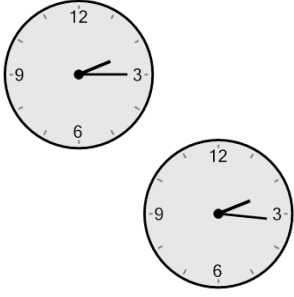
a	48 mins
b	12 mins
c	3 mins
d	42 mins
e	1 hr 42 mins
f	33 mins

3 How many hours and minutes later is the second clock?



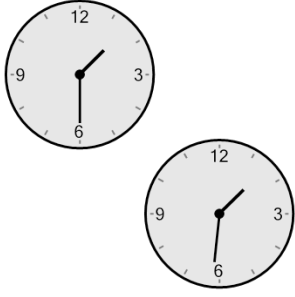
a	1 hr 27 mins
b	12 mins
c	27 mins
d	1 hr 33 mins
e	3 mins
f	1 hr 18 mins

4 How many hours and minutes later is the second clock?



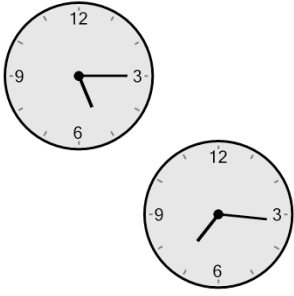
a	1 hr 1 min
b	1 hr 29 mins
c	1 hr 46 mins
d	31 mins
e	46 mins
f	1 min

5 How many hours and minutes later is the second clock?



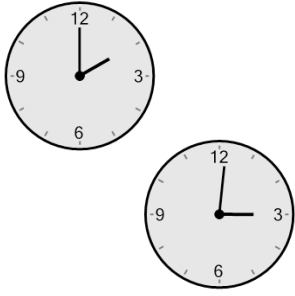
a	1 hr 29 mins
b	1 min
c	1 hr 44 mins
d	16 mins
e	1 hr 1 min
f	1 hr 14 mins

6 How many hours and minutes later is the second clock?



a	2 hrs 31 mins
b	2 hrs 1 min
c	3 hrs 31 mins
d	1 hr 31 mins
e	3 hrs 46 mins
f	46 mins

7 How many hours and minutes later is the second clock?



a	31 mins
b	2 hrs 46 mins
c	2 hrs 16 mins
d	2 hrs 31 mins
e	1 hr 1 min
f	44 mins