




Math worksheet on 'Time - Elapsed - Two Clocks To Minutes - Five Minutes (Level 1)'. Part of a broader unit on 'Time - Elapsed Time - Advanced'


Learn online: app.mobius.academy/math/units/time_elapsed_advanced/

1 How many minutes later is the second clock?



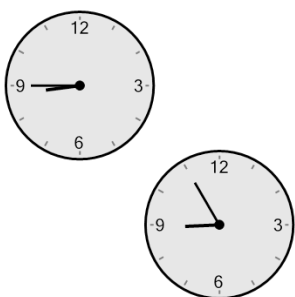
a 80 mins	b 40 mins
c 95 mins	d 100 mins
e 65 mins	f 5 mins

2 How many minutes later is the second clock?




a 25 mins	b 50 mins
c 65 mins	d 40 mins
e 70 mins	f 85 mins

3 How many minutes later is the second clock?



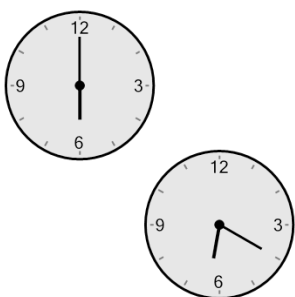
a 65 mins	b 80 mins
c 50 mins	d 10 mins
e 25 mins	f 115 mins

4 How many minutes later is the second clock?




a 5 mins	b 100 mins
c 85 mins	d 55 mins
e 70 mins	f 65 mins

5 How many minutes later is the second clock?




a 80 mins	b 5 mins
c 70 mins	d 20 mins
e 110 mins	f 55 mins

6 How many minutes later is the second clock?



a 10 mins	b 25 mins
c 40 mins	d 55 mins
e 70 mins	f 50 mins

7 How many minutes later is the second clock?



a 35 mins	b 115 mins
c 40 mins	d 25 mins
e 10 mins	f 70 mins