




Math worksheet on 'Time - Elapsed - Two Clocks To Minutes - Five Minutes (Level 2)'. Part of a broader unit on 'Time - Elapsed Time - Advanced'

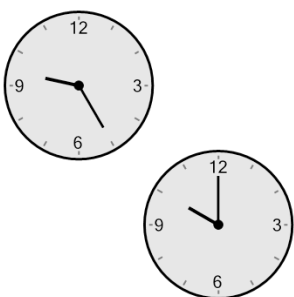
Learn online: app.mobius.academy/math/units/time_elapsed_advanced/

1 How many minutes later is the second clock?




a 20 mins	b 50 mins
c 5 mins	d 80 mins
e 125 mins	f 35 mins

2 How many minutes later is the second clock?




a 65 mins	b 55 mins
c 35 mins	d 20 mins
e 125 mins	f 70 mins

3 How many minutes later is the second clock?



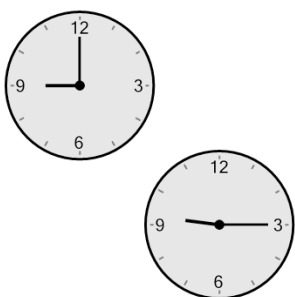
a 165 mins	b 30 mins
c 135 mins	d 75 mins
e 105 mins	f 45 mins

4 How many minutes later is the second clock?



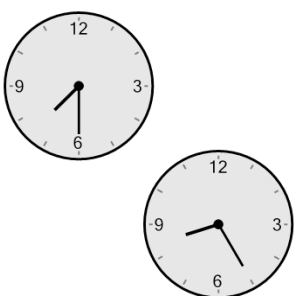
a 140 mins	b 40 mins
c 25 mins	d 95 mins
e 50 mins	f 20 mins

5 How many minutes later is the second clock?



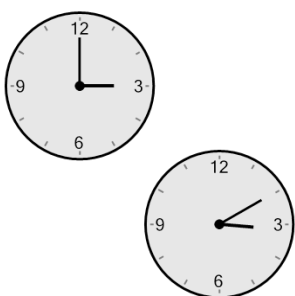
a 0 min	b 105 mins
c 15 mins	d 90 mins
e 60 mins	f 30 mins

6 How many minutes later is the second clock?



a 70 mins	b 115 mins
c 55 mins	d 50 mins
e 160 mins	f 20 mins

7 How many minutes later is the second clock?



a 35 mins	b 5 mins
c 10 mins	d 95 mins
e 65 mins	f 25 mins