




Math worksheet on 'Time - Elapsed - Two Clocks To Minutes - Five Minutes (Level 3)'. Part of a broader unit on 'Time - Elapsed Time - Advanced'

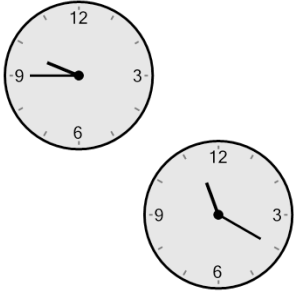
Learn online: app.mobius.academy/math/units/time_elapsed_advanced/

1 How many minutes later is the second clock?



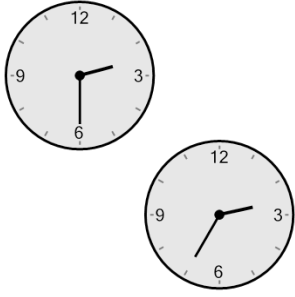
a 55 mins	b 160 mins
c 40 mins	d 115 mins
e 220 mins	f 190 mins

2 How many minutes later is the second clock?




a 155 mins	b 10 mins
c 140 mins	d 110 mins
e 95 mins	f 200 mins

3 How many minutes later is the second clock?



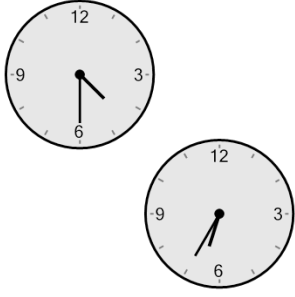
a 55 mins	b 5 mins
c 85 mins	d 25 mins
e 110 mins	f 10 mins

4 How many minutes later is the second clock?



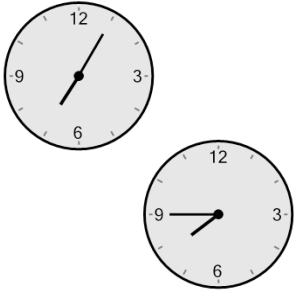
a 80 mins	b 70 mins
c 115 mins	d 85 mins
e 35 mins	f 25 mins

5 How many minutes later is the second clock?



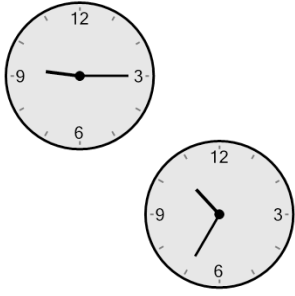
a 65 mins	b 95 mins
c 140 mins	d 125 mins
e 20 mins	f 170 mins

6 How many minutes later is the second clock?



a 25 mins	b 100 mins
c 70 mins	d 40 mins
e 65 mins	f 130 mins

7 How many minutes later is the second clock?



a 80 mins	b 5 mins
c 155 mins	d 95 mins
e 10 mins	f 185 mins