




Math worksheet on 'Time - Elapsed - Two Clocks To Minutes - Full Hours (Level 1)'. Part of a broader unit on 'Time - Elapsed Time - Basics'

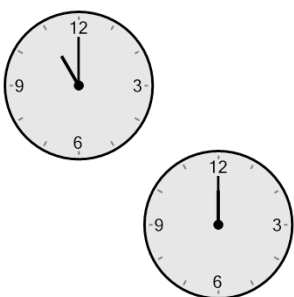
Learn online: app.mobius.academy/math/units/time_elapsed_basics/

1 How many minutes later is the second clock?




a 60 mins	b 180 mins
c 45 mins	d 0 min
e 30 mins	f 75 mins

2 How many minutes later is the second clock?




a 15 mins	b 90 mins
c 60 mins	d 120 mins
e 180 mins	f 150 mins

3 How many minutes later is the second clock?



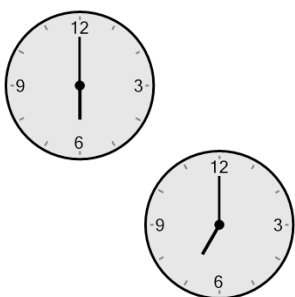
a 150 mins	b 180 mins
c 15 mins	d 0 min
e 60 mins	f 120 mins

4 How many minutes later is the second clock?




a 135 mins	b 30 mins
c 45 mins	d 75 mins
e 60 mins	f 120 mins

5 How many minutes later is the second clock?



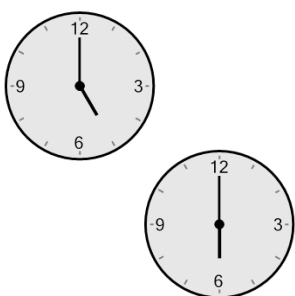
a 75 mins	b 180 mins
c 60 mins	d 0 min
e 105 mins	f 120 mins

6 How many minutes later is the second clock?



a 60 mins	b 165 mins
c 120 mins	d 15 mins
e 180 mins	f 135 mins

7 How many minutes later is the second clock?



a 0 min	b 120 mins
c 180 mins	d 150 mins
e 60 mins	f 15 mins