




Math worksheet on 'Time - Elapsed - Two Clocks To Minutes - Full Hours (Level 2)'. Part of a broader unit on 'Time - Elapsed Time - Practice'

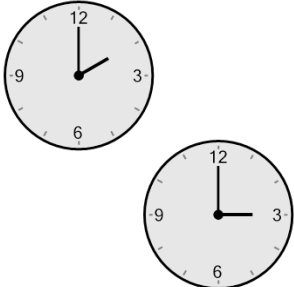
Learn online: app.mobius.academy/math/units/time_elapsed_practice/

1 How many minutes later is the second clock?




a	240 mins	b	180 mins
c	0 min	d	300 mins
e	255 mins	f	105 mins

2 How many minutes later is the second clock?



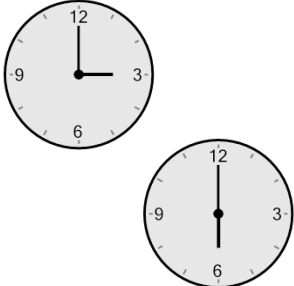
a	60 mins	b	180 mins
c	15 mins	d	120 mins
e	75 mins	f	0 min

3 How many minutes later is the second clock?



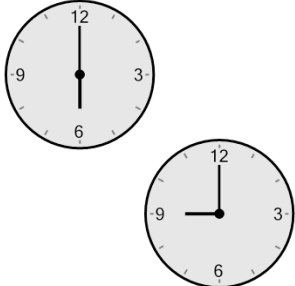
a	120 mins	b	150 mins
c	225 mins	d	165 mins
e	300 mins	f	180 mins

4 How many minutes later is the second clock?



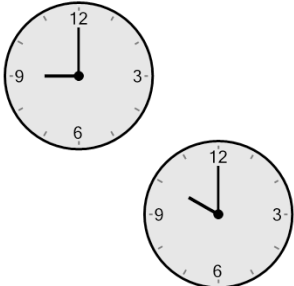
a	195 mins	b	180 mins
c	60 mins	d	285 mins
e	135 mins	f	0 min

5 How many minutes later is the second clock?



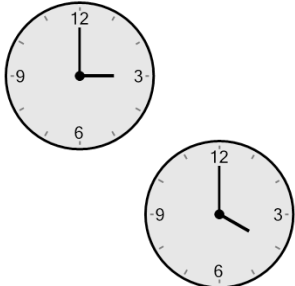
a	240 mins	b	255 mins
c	60 mins	d	180 mins
e	0 min	f	150 mins

6 How many minutes later is the second clock?



a	120 mins	b	15 mins
c	150 mins	d	165 mins
e	60 mins	f	180 mins

7 How many minutes later is the second clock?



a	120 mins	b	180 mins
c	0 min	d	15 mins
e	60 mins	f	45 mins