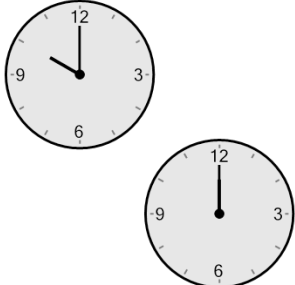




Math worksheet on 'Time - Elapsed - Two Clocks To Minutes - Full Hours (Level 3)'. Part of a broader unit on 'Time - Elapsed Time - Practice'


Learn online: app.mobius.academy/math/units/time_elapsed_practice/

1 How many minutes later is the second clock?



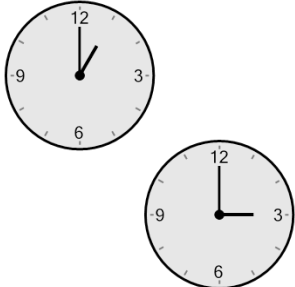
a 210 mins	b 90 mins
c 180 mins	d 165 mins
e 120 mins	f 60 mins

2 How many minutes later is the second clock?



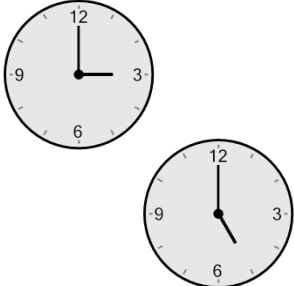
a 240 mins	b 195 mins
c 120 mins	d 180 mins
e 90 mins	f 60 mins

3 How many minutes later is the second clock?




a 165 mins	b 120 mins
c 75 mins	d 45 mins
e 180 mins	f 0 min

4 How many minutes later is the second clock?



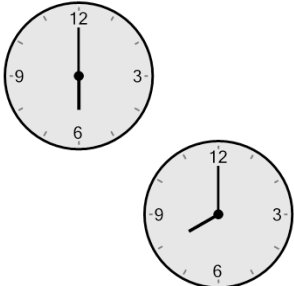
a 240 mins	b 60 mins
c 135 mins	d 120 mins
e 75 mins	f 0 min

5 How many minutes later is the second clock?



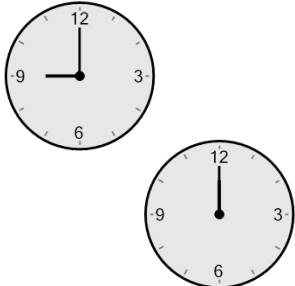
a 165 mins	b 60 mins
c 180 mins	d 15 mins
e 120 mins	f 75 mins

6 How many minutes later is the second clock?



a 165 mins	b 150 mins
c 75 mins	d 120 mins
e 180 mins	f 240 mins

7 How many minutes later is the second clock?



a 0 min	b 165 mins
c 120 mins	d 240 mins
e 285 mins	f 180 mins