




Math worksheet on 'Time - Elapsed - Two Clocks To Minutes - Half Hours (Level 1)'. Part of a broader unit on 'Time - Elapsed Time - Basics'

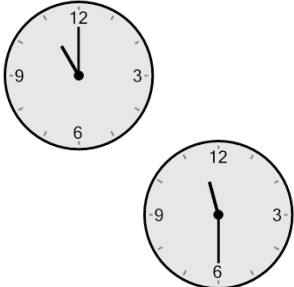
Learn online: app.mobius.academy/math/units/time_elapsed_basics/

1 How many minutes later is the second clock?



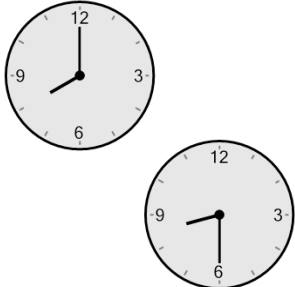
a 30 mins	b 120 mins
c 15 mins	d 90 mins
e 60 mins	f 75 mins

2 How many minutes later is the second clock?



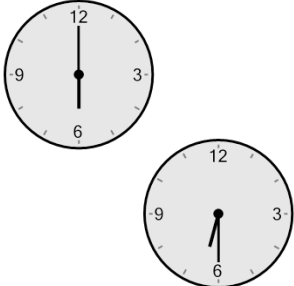
a 120 mins	b 60 mins
c 30 mins	d 45 mins
e 75 mins	f 0 min

3 How many minutes later is the second clock?



a 30 mins	b 150 mins
c 105 mins	d 120 mins
e 60 mins	f 75 mins

4 How many minutes later is the second clock?



a 45 mins	b 90 mins
c 105 mins	d 30 mins
e 60 mins	f 135 mins