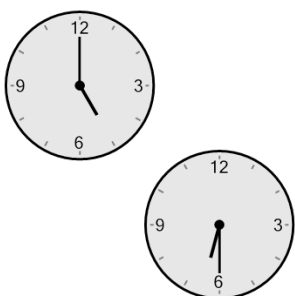




Math worksheet on 'Time - Elapsed - Two Clocks To Minutes - Half Hours (Level 2)'. Part of a broader unit on 'Time - Elapsed Time - Practice'

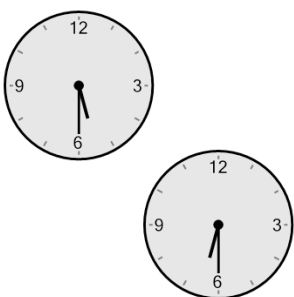
Learn online: app.mobius.academy/math/units/time_elapsed_practice/

1 How many minutes later is the second clock?



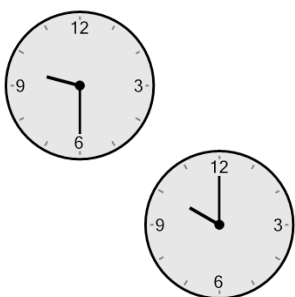
a 90 mins	b 60 mins
c 15 mins	d 45 mins
e 150 mins	f 165 mins

2 How many minutes later is the second clock?




a 135 mins	b 150 mins
c 45 mins	d 90 mins
e 60 mins	f 15 mins

3 How many minutes later is the second clock?




a 60 mins	b 30 mins
c 150 mins	d 105 mins
e 90 mins	f 75 mins

4 How many minutes later is the second clock?



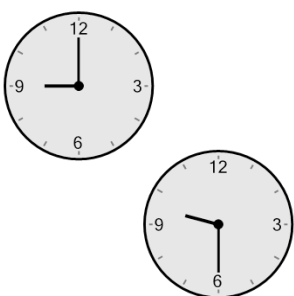
a 75 mins	b 90 mins
c 120 mins	d 180 mins
e 150 mins	f 210 mins

5 How many minutes later is the second clock?



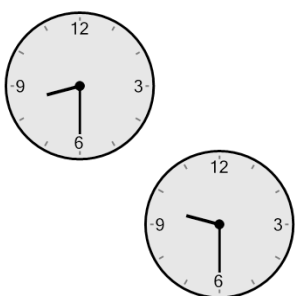
a 75 mins	b 60 mins
c 30 mins	d 195 mins
e 90 mins	f 105 mins

6 How many minutes later is the second clock?



a 30 mins	b 60 mins
c 90 mins	d 150 mins
e 105 mins	f 0 min

7 How many minutes later is the second clock?



a 0 min	b 180 mins
c 120 mins	d 90 mins
e 60 mins	f 30 mins