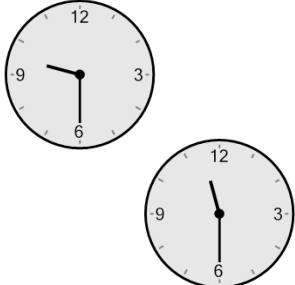




Math worksheet on 'Time - Elapsed - Two Clocks To Minutes - Half Hours (Level 3)'. Part of a broader unit on 'Time - Elapsed Time - Practice'

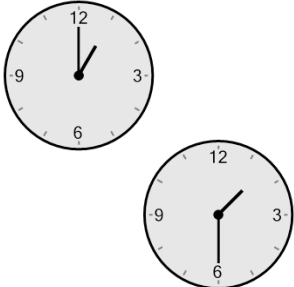
Learn online: app.mobius.academy/math/units/time_elapsed_practice/

1 How many minutes later is the second clock?



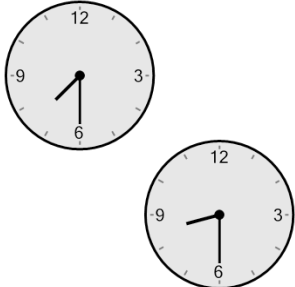
a	225 mins	b	60 mins
c	105 mins	d	180 mins
e	120 mins	f	135 mins

2 How many minutes later is the second clock?




a	75 mins	b	60 mins
c	90 mins	d	150 mins
e	30 mins	f	135 mins

3 How many minutes later is the second clock?



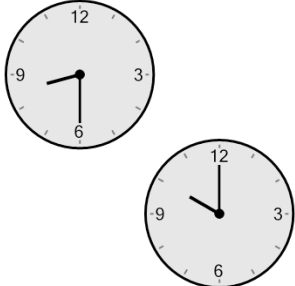
a	180 mins	b	60 mins
c	30 mins	d	90 mins
e	45 mins	f	15 mins

4 How many minutes later is the second clock?



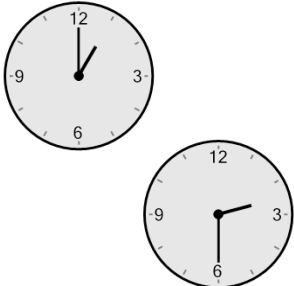
a	120 mins	b	0 min
c	60 mins	d	45 mins
e	15 mins	f	165 mins

5 How many minutes later is the second clock?



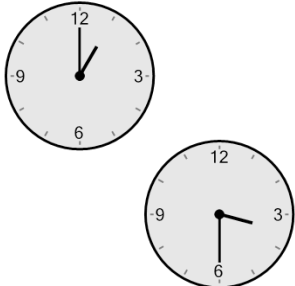
a	0 min	b	90 mins
c	180 mins	d	60 mins
e	210 mins	f	45 mins

6 How many minutes later is the second clock?



a	165 mins	b	105 mins
c	15 mins	d	90 mins
e	30 mins	f	150 mins

7 How many minutes later is the second clock?



a	210 mins	b	105 mins
c	180 mins	d	120 mins
e	150 mins	f	30 mins