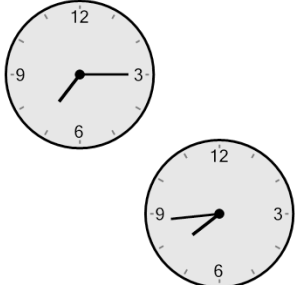




Math worksheet on 'Time - Elapsed - Two Clocks To Minutes - One Minutes (Level 1)'. Part of a broader unit on 'Time - Elapsed Time - Advanced'

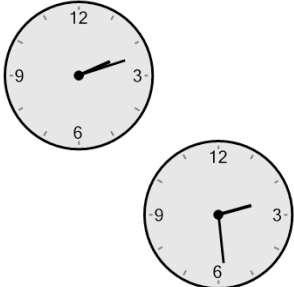
Learn online: app.mobius.academy/math/units/time_elapsed_advanced/

1 How many minutes later is the second clock?




a 119 mins	b 59 mins
c 74 mins	d 61 mins
e 29 mins	f 134 mins

2 How many minutes later is the second clock?




a 88 mins	b 32 mins
c 58 mins	d 107 mins
e 47 mins	f 17 mins

3 How many minutes later is the second clock?




a 9 mins	b 6 mins
c 54 mins	d 51 mins
e 99 mins	f 21 mins

4 How many minutes later is the second clock?




a 55 mins	b 100 mins
c 70 mins	d 40 mins
e 10 mins	f 20 mins

5 How many minutes later is the second clock?



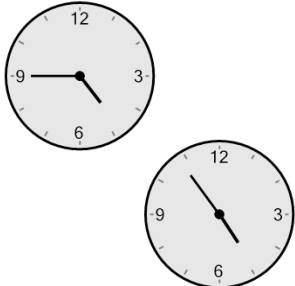
a 82 mins	b 53 mins
c 52 mins	d 7 mins
e 8 mins	f 37 mins

6 How many minutes later is the second clock?



a 69 mins	b 39 mins
c 84 mins	d 9 mins
e 96 mins	f 21 mins

7 How many minutes later is the second clock?



a 6 mins	b 36 mins
c 21 mins	d 81 mins
e 66 mins	f 9 mins