




Math worksheet on 'Time - Elapsed - Two Clocks To Minutes - One Minutes (Level 2)'. Part of a broader unit on 'Time - Elapsed Time - Advanced'

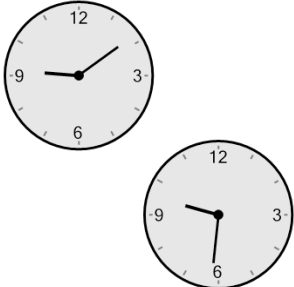
Learn online: [app.mobius.academy/math/units/time\\_elapsed\\_advanced/](http://app.mobius.academy/math/units/time_elapsed_advanced/)

**1** How many minutes later is the second clock?



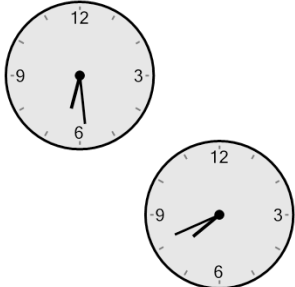
<b>a</b> 20 mins	<b>b</b> 50 mins
<b>c</b> 10 mins	<b>d</b> 55 mins
<b>e</b> 110 mins	<b>f</b> 40 mins

**2** How many minutes later is the second clock?




<b>a</b> 22 mins	<b>b</b> 37 mins
<b>c</b> 112 mins	<b>d</b> 23 mins
<b>e</b> 38 mins	<b>f</b> 127 mins

**3** How many minutes later is the second clock?



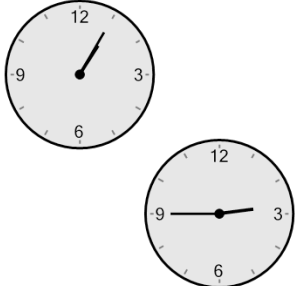
<b>a</b> 27 mins	<b>b</b> 18 mins
<b>c</b> 177 mins	<b>d</b> 102 mins
<b>e</b> 72 mins	<b>f</b> 3 mins

**4** How many minutes later is the second clock?



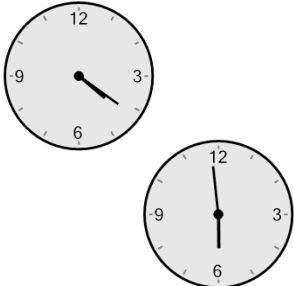
<b>a</b> 47 mins	<b>b</b> 137 mins
<b>c</b> 32 mins	<b>d</b> 62 mins
<b>e</b> 17 mins	<b>f</b> 2 mins

**5** How many minutes later is the second clock?



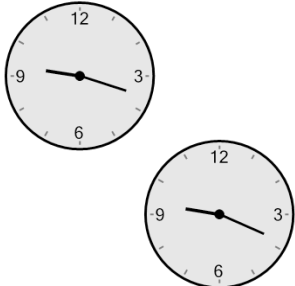
<b>a</b> 100 mins	<b>b</b> 190 mins
<b>c</b> 10 mins	<b>d</b> 130 mins
<b>e</b> 55 mins	<b>f</b> 5 mins

**6** How many minutes later is the second clock?



<b>a</b> 53 mins	<b>b</b> 83 mins
<b>c</b> 7 mins	<b>d</b> 98 mins
<b>e</b> 188 mins	<b>f</b> 8 mins

**7** How many minutes later is the second clock?



<b>a</b> 104 mins	<b>b</b> 31 mins
<b>c</b> 1 min	<b>d</b> 46 mins
<b>e</b> 91 mins	<b>f</b> 106 mins