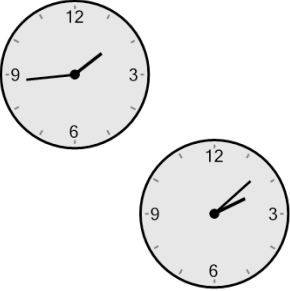




Math worksheet on 'Time - Elapsed - Two Clocks To Minutes - One Minutes (Level 3)'. Part of a broader unit on 'Time - Elapsed Time - Advanced'


Learn online: app.mobius.academy/math/units/time_elapsed_advanced/

1 How many minutes later is the second clock?




a 24 mins	b 99 mins
c 51 mins	d 36 mins
e 81 mins	f 21 mins

2 How many minutes later is the second clock?



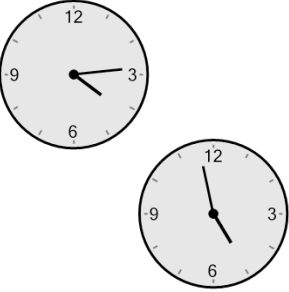
a 16 mins	b 14 mins
c 106 mins	d 59 mins
e 44 mins	f 46 mins

3 How many minutes later is the second clock?




a 20 mins	b 5 mins
c 70 mins	d 100 mins
e 80 mins	f 25 mins

4 How many minutes later is the second clock?



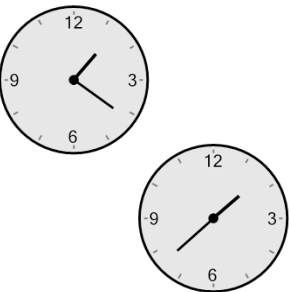
a 149 mins	b 74 mins
c 119 mins	d 44 mins
e 14 mins	f 46 mins

5 How many minutes later is the second clock?




a 49 mins	b 26 mins
c 139 mins	d 124 mins
e 64 mins	f 19 mins

6 How many minutes later is the second clock?



a 17 mins	b 32 mins
c 13 mins	d 28 mins
e 47 mins	f 58 mins

7 How many minutes later is the second clock?



a 95 mins	b 80 mins
c 20 mins	d 10 mins
e 65 mins	f 35 mins