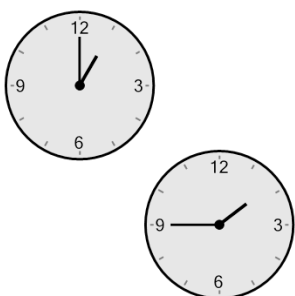




Math worksheet on 'Time - Elapsed - Two Clocks To Minutes - Quarter Hours (Level 1)'. Part of a broader unit on 'Time - Elapsed Time - Basics'

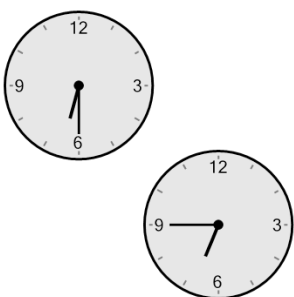
Learn online: [app.mobius.academy/math/units/time\\_elapsed\\_basics/](http://app.mobius.academy/math/units/time_elapsed_basics/)

**1** How many minutes later is the second clock?



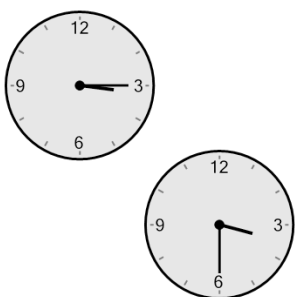
<b>a</b> 150 mins	<b>b</b> 90 mins
<b>c</b> 120 mins	<b>d</b> 75 mins
<b>e</b> 45 mins	<b>f</b> 60 mins

**2** How many minutes later is the second clock?



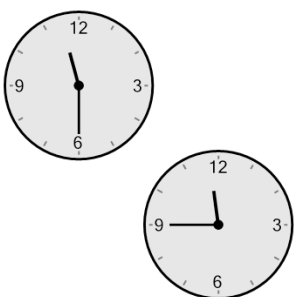
<b>a</b> 15 mins	<b>b</b> 105 mins
<b>c</b> 60 mins	<b>d</b> 45 mins
<b>e</b> 90 mins	<b>f</b> 120 mins

**3** How many minutes later is the second clock?



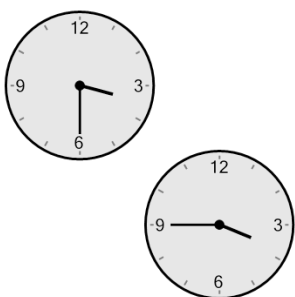
<b>a</b> 75 mins	<b>b</b> 45 mins
<b>c</b> 15 mins	<b>d</b> 30 mins
<b>e</b> 105 mins	<b>f</b> 0 min

**4** How many minutes later is the second clock?



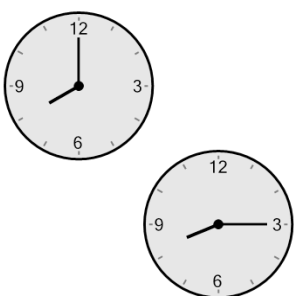
<b>a</b> 30 mins	<b>b</b> 120 mins
<b>c</b> 75 mins	<b>d</b> 45 mins
<b>e</b> 90 mins	<b>f</b> 15 mins

**5** How many minutes later is the second clock?



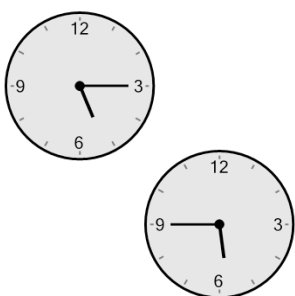
<b>a</b> 15 mins	<b>b</b> 105 mins
<b>c</b> 60 mins	<b>d</b> 0 min
<b>e</b> 75 mins	<b>f</b> 30 mins

**6** How many minutes later is the second clock?



<b>a</b> 45 mins	<b>b</b> 15 mins
<b>c</b> 90 mins	<b>d</b> 105 mins
<b>e</b> 75 mins	<b>f</b> 120 mins

**7** How many minutes later is the second clock?



<b>a</b> 105 mins	<b>b</b> 30 mins
<b>c</b> 15 mins	<b>d</b> 60 mins
<b>e</b> 75 mins	<b>f</b> 120 mins