




Math worksheet on 'Time - Elapsed - Two Clocks To Minutes - Quarter Hours (Level 2)'. Part of a broader unit on 'Time - Elapsed Time - Practice'


Learn online: [app.mobius.academy/math/units/time\\_elapsed\\_practice/](http://app.mobius.academy/math/units/time_elapsed_practice/)

**1** How many minutes later is the second clock?



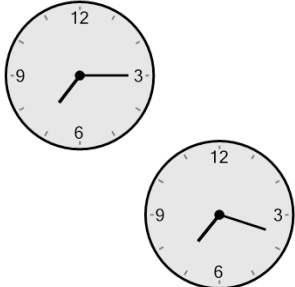
<b>a</b> 88 mins	<b>b</b> 73 mins
<b>c</b> 77 mins	<b>d</b> 62 mins
<b>e</b> 43 mins	<b>f</b> 2 mins

**2** How many minutes later is the second clock?



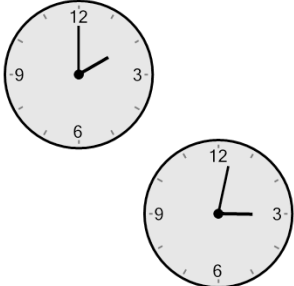
<b>a</b> 28 mins	<b>b</b> 92 mins
<b>c</b> 62 mins	<b>d</b> 137 mins
<b>e</b> 32 mins	<b>f</b> 152 mins

**3** How many minutes later is the second clock?



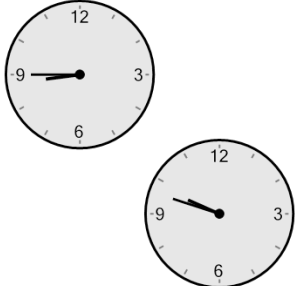
<b>a</b> 3 mins	<b>b</b> 12 mins
<b>c</b> 108 mins	<b>d</b> 27 mins
<b>e</b> 102 mins	<b>f</b> 87 mins

**4** How many minutes later is the second clock?



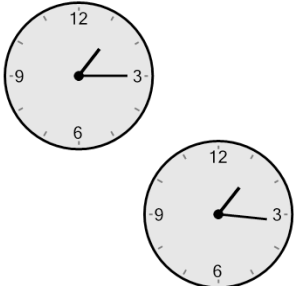
<b>a</b> 43 mins	<b>b</b> 167 mins
<b>c</b> 47 mins	<b>d</b> 32 mins
<b>e</b> 92 mins	<b>f</b> 62 mins

**5** How many minutes later is the second clock?



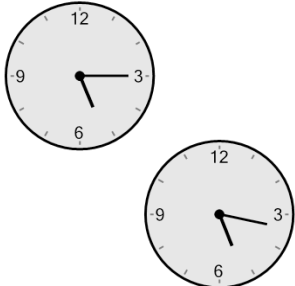
<b>a</b> 48 mins	<b>b</b> 138 mins
<b>c</b> 63 mins	<b>d</b> 168 mins
<b>e</b> 93 mins	<b>f</b> 123 mins

**6** How many minutes later is the second clock?



<b>a</b> 16 mins	<b>b</b> 74 mins
<b>c</b> 29 mins	<b>d</b> 91 mins
<b>e</b> 59 mins	<b>f</b> 1 min

**7** How many minutes later is the second clock?



<b>a</b> 2 mins	<b>b</b> 43 mins
<b>c</b> 73 mins	<b>d</b> 17 mins
<b>e</b> 103 mins	<b>f</b> 32 mins