




Math worksheet on 'Time - Elapsed - Two Clocks To Minutes - Quarter Hours (Level 3)'. Part of a broader unit on 'Time - Elapsed Time - Advanced'

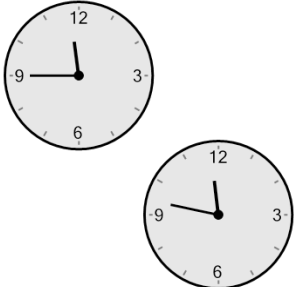
Learn online: app.mobius.academy/math/units/time_elapsed_advanced/

1 How many minutes later is the second clock?




a 18 mins	b 123 mins
c 63 mins	d 153 mins
e 27 mins	f 108 mins

2 How many minutes later is the second clock?




a 77 mins	b 92 mins
c 32 mins	d 43 mins
e 58 mins	f 2 mins

3 How many minutes later is the second clock?



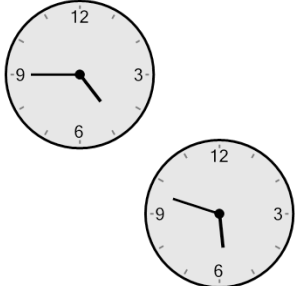
a 121 mins	b 31 mins
c 151 mins	d 91 mins
e 211 mins	f 181 mins

4 How many minutes later is the second clock?




a 32 mins	b 2 mins
c 62 mins	d 28 mins
e 107 mins	f 17 mins

5 How many minutes later is the second clock?



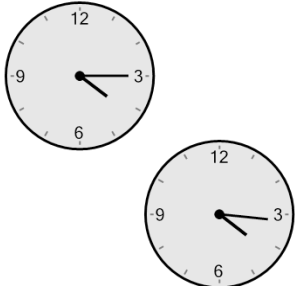
a 48 mins	b 33 mins
c 78 mins	d 168 mins
e 153 mins	f 63 mins

6 How many minutes later is the second clock?



a 2 mins	b 107 mins
c 13 mins	d 32 mins
e 28 mins	f 17 mins

7 How many minutes later is the second clock?



a 61 mins	b 46 mins
c 16 mins	d 59 mins
e 1 min	f 31 mins