





Math worksheet on 'Time - Elapsed Negative - Two Clocks To Hours & Minutes - Five Minutes (Level 2)'.  
Part of a broader unit on 'Time - Elapsed Time, Negative - Practice'

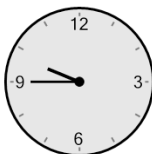

Learn online: [app.mobius.academy/math/units/time\\_elapsed\\_negative\\_practice/](http://app.mobius.academy/math/units/time_elapsed_negative_practice/)

**1** How many hours and minutes earlier is the second clock?





- a** 1 hr 30 mins
- b** 30 mins
- c** 1 hr 15 mins
- d** 0 hr
- e** 2 hrs 30 mins
- f** 45 mins

**2** How many hours and minutes earlier is the second clock?





- a** 25 mins
- b** 10 mins
- c** 1 hr 25 mins
- d** 1 hr 10 mins
- e** 50 mins
- f** 40 mins

**3** How many hours and minutes earlier is the second clock?





- a** 1 hr 20 mins
- b** 1 hr 10 mins
- c** 20 mins
- d** 1 hr 5 mins
- e** 55 mins
- f** 10 mins

**4** How many hours and minutes earlier is the second clock?





- a** 2 hrs 10 mins
- b** 5 mins
- c** 1 hr 10 mins
- d** 2 hrs 40 mins
- e** 1 hr 25 mins
- f** 55 mins

**5** How many hours and minutes earlier is the second clock?





- a** 20 mins
- b** 1 hr 55 mins
- c** 55 mins
- d** 1 hr 25 mins
- e** 25 mins
- f** 40 mins

**6** How many hours and minutes earlier is the second clock?



- a** 35 mins
- b** 1 hr 10 mins
- c** 25 mins
- d** 5 mins
- e** 2 hrs 20 mins
- f** 2 hrs 5 mins

**7** How many hours and minutes earlier is the second clock?



- a** 45 mins
- b** 1 hr 30 mins
- c** 1 hr 45 mins
- d** 15 mins
- e** 30 mins
- f** 1 hr 15 mins