
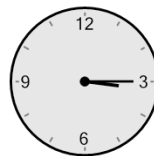




Math worksheet on 'Time - Elapsed Negative - Two Clocks To Hours & Minutes - Five Minutes (Level 3)'.
Part of a broader unit on 'Time - Elapsed Time, Negative - Advanced'

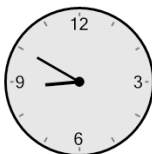

Learn online: app.mobius.academy/math/units/time_elapsed_negative_advanced/

1 How many hours and minutes earlier is the second clock?



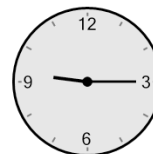

- a** 45 mins
- b** 3 hrs 15 mins
- c** 4 hrs
- d** 2 hrs
- e** 1 hr 15 mins
- f** 2 hrs 15 mins

2 How many hours and minutes earlier is the second clock?





- a** 1 hr 15 mins
- b** 1 hr 45 mins
- c** 15 mins
- d** 30 mins
- e** 2 hrs
- f** 1 hr 30 mins

3 How many hours and minutes earlier is the second clock?





- a** 3 hrs 10 mins
- b** 1 hr 55 mins
- c** 40 mins
- d** 2 hrs 55 mins
- e** 55 mins
- f** 3 hrs 40 mins

4 How many hours and minutes earlier is the second clock?





- a** 1 hr 10 mins
- b** 20 mins
- c** 5 mins
- d** 1 hr 50 mins
- e** 10 mins
- f** 50 mins

5 How many hours and minutes earlier is the second clock?





- a** 1 hr
- b** 45 mins
- c** 1 hr 30 mins
- d** 0 hr
- e** 15 mins
- f** 30 mins

6 How many hours and minutes earlier is the second clock?



- a** 1 hr 45 mins
- b** 45 mins
- c** 3 hrs 15 mins
- d** 3 hrs
- e** 2 hrs
- f** 2 hrs 30 mins

7 How many hours and minutes earlier is the second clock?



- a** 1 hr 25 mins
- b** 20 mins
- c** 5 mins
- d** 2 hrs 10 mins
- e** 1 hr 10 mins
- f** 2 hrs 25 mins