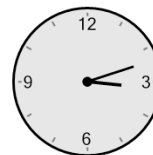
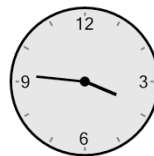




Math worksheet on 'Time - Elapsed Negative - Two Clocks To Hours & Minutes - One Minutes (Level 2)'.  
Part of a broader unit on 'Time - Elapsed Time, Negative - Practice'

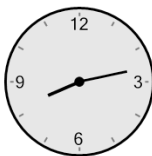
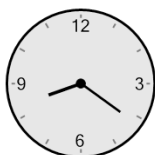
Learn online: [app.mobius.academy/math/units/time\\_elapsed\\_negative\\_practice/](http://app.mobius.academy/math/units/time_elapsed_negative_practice/)

**1** How many hours and minutes earlier is the second clock?



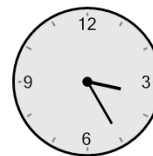
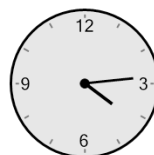
- a** 1 hr 19 mins
- b** 2 hrs 4 mins
- c** 19 mins
- d** 11 mins
- e** 34 mins
- f** 56 mins

**2** How many hours and minutes earlier is the second clock?




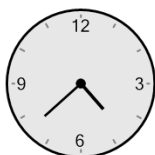
- a** 23 mins
- b** 53 mins
- c** 1 hr 22 mins
- d** 52 mins
- e** 1 hr 53 mins
- f** 8 mins

**3** How many hours and minutes earlier is the second clock?





- a** 1 hr 34 mins
- b** 49 mins
- c** 34 mins
- d** 11 mins
- e** 1 hr 4 mins
- f** 26 mins

**4** How many hours and minutes earlier is the second clock?




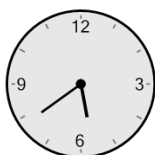
- a** 48 mins
- b** 1 hr 18 mins
- c** 2 hrs 3 mins
- d** 3 mins
- e** 2 hrs 18 mins
- f** 1 hr 48 mins

**5** How many hours and minutes earlier is the second clock?





- a** 49 mins
- b** 1 hr 49 mins
- c** 1 hr 19 mins
- d** 41 mins
- e** 2 hrs 4 mins
- f** 19 mins

**6** How many hours and minutes earlier is the second clock?



- a** 46 mins
- b** 2 hrs 16 mins
- c** 44 mins
- d** 2 hrs 1 min
- e** 1 hr 1 min
- f** 59 mins

**7** How many hours and minutes earlier is the second clock?



- a** 2 hrs 14 mins
- b** 16 mins
- c** 1 hr 29 mins
- d** 44 mins
- e** 2 hrs 29 mins
- f** 1 min