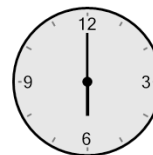





Math worksheet on 'Time - Elapsed Negative - Two Clocks To Hours & Minutes - One Minutes (Level 3)'.
Part of a broader unit on 'Time - Elapsed Time, Negative - Advanced'

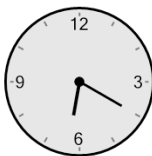

Learn online: app.mobius.academy/math/units/time_elapsed_negative_advanced/

1 How many hours and minutes earlier is the second clock?



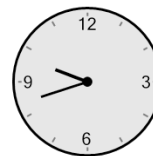

- a** 1 hr 50 mins
- b** 2 hrs 5 mins
- c** 1 hr 5 mins
- d** 3 hrs 20 mins
- e** 3 hrs 35 mins
- f** 50 mins

2 How many hours and minutes earlier is the second clock?





- a** 1 hr 43 mins
- b** 1 hr 28 mins
- c** 2 hrs 13 mins
- d** 1 hr 2 mins
- e** 43 mins
- f** 47 mins

3 How many hours and minutes earlier is the second clock?





- a** 1 hr 16 mins
- b** 16 mins
- c** 1 hr 1 min
- d** 1 hr 14 mins
- e** 29 mins
- f** 59 mins

4 How many hours and minutes earlier is the second clock?



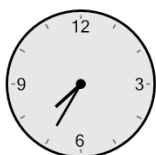
- a** 1 hr 56 mins
- b** 4 mins
- c** 1 hr 41 mins
- d** 26 mins
- e** 11 mins
- f** 56 mins

5 How many hours and minutes earlier is the second clock?



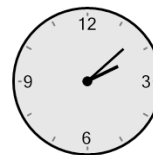
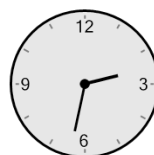
- | | |
|---------------------|----------------------|
| a 1 hr 1 min | b 2 hrs 1 min |
| c 1 min | d 46 mins |
| e 14 mins | f 31 mins |

6 How many hours and minutes earlier is the second clock?



- a** 1 hr 52 mins
- b** 7 mins
- c** 22 mins
- d** 23 mins
- e** 38 mins
- f** 52 mins

7 How many hours and minutes earlier is the second clock?



- a** 1 hr 9 mins
- b** 1 hr 39 mins
- c** 24 mins
- d** 36 mins
- e** 51 mins
- f** 1 hr 6 mins