
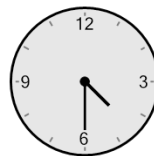




Math worksheet on 'Time - Elapsed Negative - Two Clocks To Hours & Minutes - Quarter Hours (Level 1)'. Part of a broader unit on 'Time - Elapsed Time, Negative - Intro'


Learn online: app.mobius.academy/math/units/time_elapsed_negative_intro/

1 How many hours and minutes earlier is the second clock?





- a** 1 hr 30 mins
- b** 2 hrs
- c** 30 mins
- d** 0 hr
- e** 1 hr 45 mins
- f** 45 mins

2 How many hours and minutes earlier is the second clock?




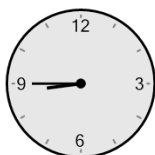
- a** 15 mins
- b** 1 hr 45 mins
- c** 45 mins
- d** 0 hr
- e** 30 mins
- f** 1 hr 30 mins

3 How many hours and minutes earlier is the second clock?




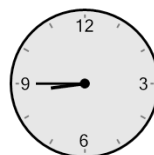
- a** 30 mins
- b** 1 hr
- c** 0 hr
- d** 45 mins
- e** 15 mins
- f** 1 hr 15 mins

4 How many hours and minutes earlier is the second clock?




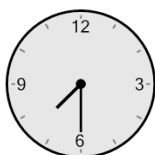
- a** 1 hr 30 mins
- b** 30 mins
- c** 2 hrs
- d** 1 hr
- e** 0 hr
- f** 3 hrs

5 How many hours and minutes earlier is the second clock?




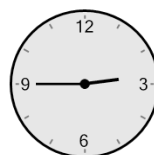
- a** 1 hr 15 mins
- b** 45 mins
- c** 2 hrs
- d** 1 hr 30 mins
- e** 1 hr
- f** 15 mins

6 How many hours and minutes earlier is the second clock?



- a** 1 hr 15 mins
- b** 15 mins
- c** 45 mins
- d** 2 hrs 30 mins
- e** 1 hr 30 mins
- f** 30 mins

7 How many hours and minutes earlier is the second clock?



- a** 1 hr
- b** 15 mins
- c** 30 mins
- d** 45 mins
- e** 1 hr 15 mins
- f** 1 hr 45 mins