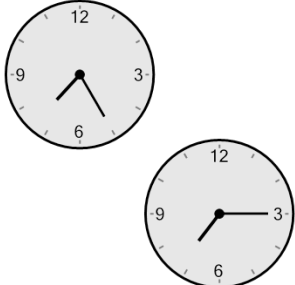




Math worksheet on 'Time - Elapsed Negative - Two Clocks To Minutes - Five Minutes (Level 1)'. Part of a broader unit on 'Time - Elapsed Time - Basics'

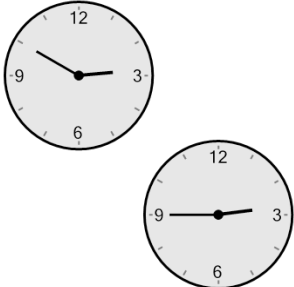
Learn online: app.mobius.academy/math/units/time_elapsed_basics/

1 How many minutes earlier is the second clock?



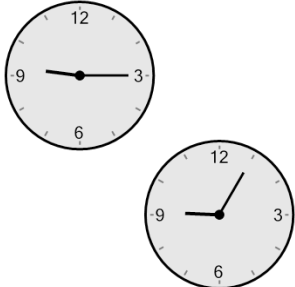
a 35 min	b 25 min
c 5 min	d 55 min
e 10 min	f 95 min

2 How many minutes earlier is the second clock?




a 5 min	b 95 min
c 100 min	d 50 min
e 70 min	f 10 min

3 How many minutes earlier is the second clock?




a 115 min	b 5 min
c 10 min	d 35 min
e 55 min	f 70 min

4 How many minutes earlier is the second clock?



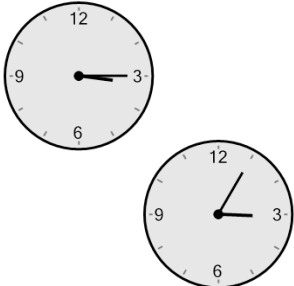
a 65 min	b 5 min
c 80 min	d 35 min
e 55 min	f 10 min

5 How many minutes earlier is the second clock?




a 100 min	b 25 min
c 20 min	d 70 min
e 95 min	f 10 min

6 How many minutes earlier is the second clock?



a 5 min	b 85 min
c 50 min	d 10 min
e 100 min	f 115 min

7 How many minutes earlier is the second clock?



a 35 min	b 25 min
c 20 min	d 95 min
e 50 min	f 5 min