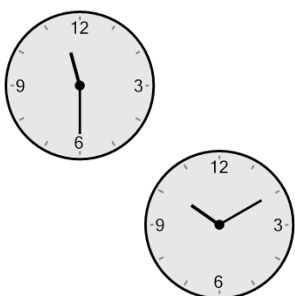




Math worksheet on 'Time - Elapsed Negative - Two Clocks To Minutes - Five Minutes (Level 2)'. Part of a broader unit on 'Time - Elapsed Time, Negative - Practice'

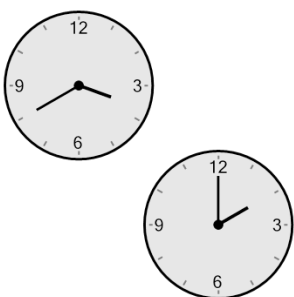
Learn online: app.mobius.academy/math/units/time_elapsed_negative_practice/

1 How many minutes earlier is the second clock?




| | | | |
|----------|---------|----------|---------|
| a | 125 min | b | 185 min |
| c | 80 min | d | 155 min |
| e | 110 min | f | 5 min |

2 How many minutes earlier is the second clock?



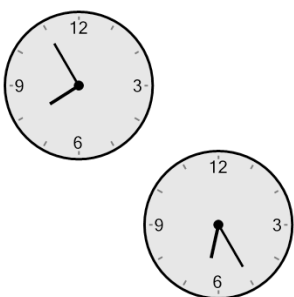
| | | | |
|----------|---------|----------|---------|
| a | 160 min | b | 145 min |
| c | 205 min | d | 85 min |
| e | 100 min | f | 10 min |

3 How many minutes earlier is the second clock?




| | | | |
|----------|---------|----------|---------|
| a | 30 min | b | 0 min |
| c | 75 min | d | 180 min |
| e | 120 min | f | 165 min |

4 How many minutes earlier is the second clock?



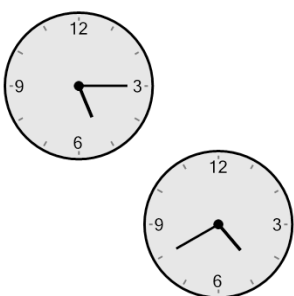
| | | | |
|----------|---------|----------|---------|
| a | 120 min | b | 135 min |
| c | 90 min | d | 150 min |
| e | 0 min | f | 75 min |

5 How many minutes earlier is the second clock?



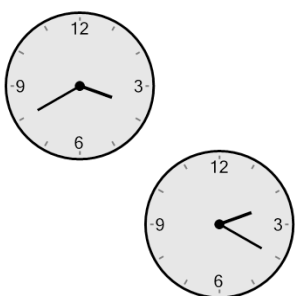
| | | | |
|----------|--------|----------|---------|
| a | 95 min | b | 55 min |
| c | 50 min | d | 65 min |
| e | 5 min | f | 125 min |

6 How many minutes earlier is the second clock?



| | | | |
|----------|--------|----------|---------|
| a | 20 min | b | 40 min |
| c | 95 min | d | 110 min |
| e | 35 min | f | 80 min |

7 How many minutes earlier is the second clock?



| | | | |
|----------|---------|----------|--------|
| a | 185 min | b | 50 min |
| c | 110 min | d | 5 min |
| e | 10 min | f | 80 min |