




Math worksheet on 'Time - Elapsed Negative - Two Clocks To Minutes - Five Minutes (Level 3)'. Part of a broader unit on 'Time - Elapsed Time, Negative - Advanced'

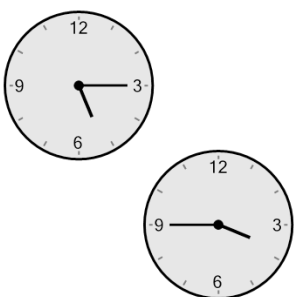
Learn online: app.mobius.academy/math/units/time_elapsed_negative_advanced/

1 How many minutes earlier is the second clock?



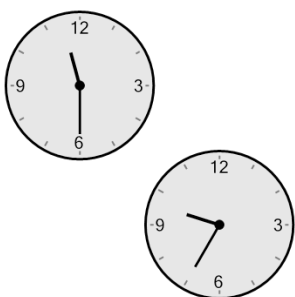
a	140 min	b	20 min
c	200 min	d	10 min
e	65 min	f	95 min

2 How many minutes earlier is the second clock?




a	90 min	b	30 min
c	45 min	d	60 min
e	210 min	f	180 min

3 How many minutes earlier is the second clock?



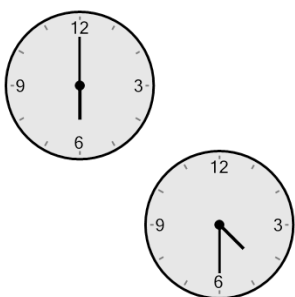
a	70 min	b	55 min
c	205 min	d	145 min
e	115 min	f	130 min

4 How many minutes earlier is the second clock?



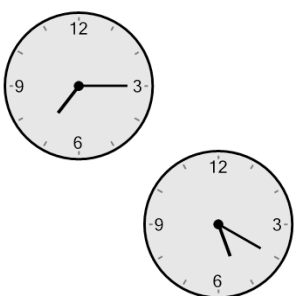
a	120 min	b	105 min
c	180 min	d	210 min
e	90 min	f	0 min

5 How many minutes earlier is the second clock?



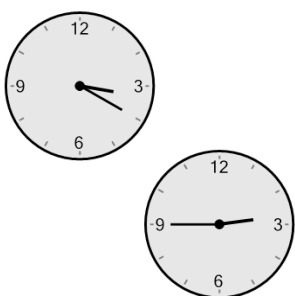
a	30 min	b	120 min
c	150 min	d	15 min
e	0 min	f	90 min

6 How many minutes earlier is the second clock?



a	100 min	b	145 min
c	25 min	d	10 min
e	115 min	f	55 min

7 How many minutes earlier is the second clock?



a	65 min	b	5 min
c	125 min	d	70 min
e	20 min	f	35 min