




Math worksheet on 'Time - Elapsed Negative - Two Clocks To Minutes - Full Hours (Level 3)'. Part of a broader unit on 'Time - Elapsed Time, Negative - Intro'

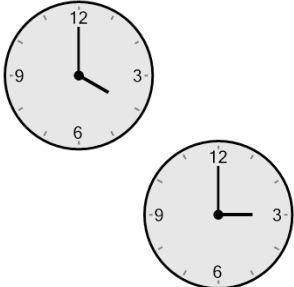
Learn online: [app.mobius.academy/math/units/time\\_elapsed\\_negative\\_intro/](http://app.mobius.academy/math/units/time_elapsed_negative_intro/)

**1** How many minutes earlier is the second clock?




<b>a</b>	195 min	<b>b</b>	120 min
<b>c</b>	180 min	<b>d</b>	270 min
<b>e</b>	225 min	<b>f</b>	165 min

**2** How many minutes earlier is the second clock?



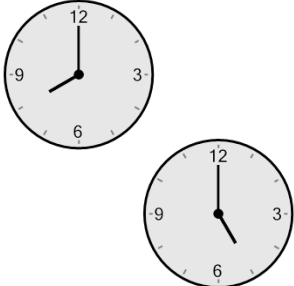
<b>a</b>	60 min	<b>b</b>	120 min
<b>c</b>	180 min	<b>d</b>	15 min
<b>e</b>	165 min	<b>f</b>	240 min

**3** How many minutes earlier is the second clock?



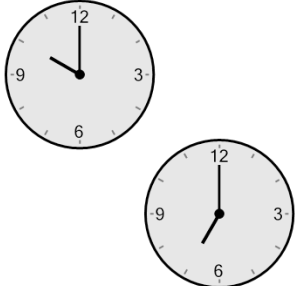
<b>a</b>	120 min	<b>b</b>	0 min
<b>c</b>	240 min	<b>d</b>	165 min
<b>e</b>	90 min	<b>f</b>	195 min

**4** How many minutes earlier is the second clock?



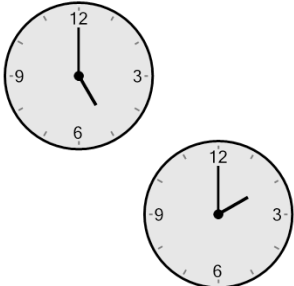
<b>a</b>	180 min	<b>b</b>	90 min
<b>c</b>	225 min	<b>d</b>	300 min
<b>e</b>	285 min	<b>f</b>	240 min

**5** How many minutes earlier is the second clock?



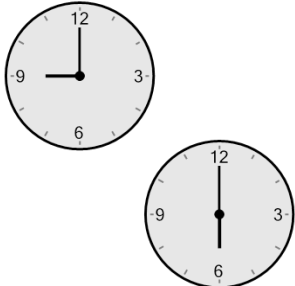
<b>a</b>	60 min	<b>b</b>	240 min
<b>c</b>	75 min	<b>d</b>	195 min
<b>e</b>	180 min	<b>f</b>	105 min

**6** How many minutes earlier is the second clock?



<b>a</b>	300 min	<b>b</b>	180 min
<b>c</b>	60 min	<b>d</b>	240 min
<b>e</b>	120 min	<b>f</b>	360 min

**7** How many minutes earlier is the second clock?



<b>a</b>	240 min	<b>b</b>	60 min
<b>c</b>	285 min	<b>d</b>	180 min
<b>e</b>	225 min	<b>f</b>	270 min