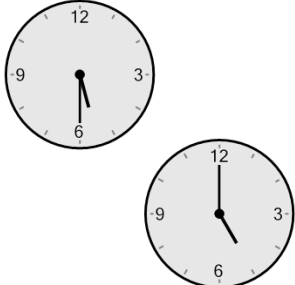




Math worksheet on 'Time - Elapsed Negative - Two Clocks To Minutes - Half Hours (Level 2)'. Part of a broader unit on 'Time - Elapsed Time, Negative - Intro'

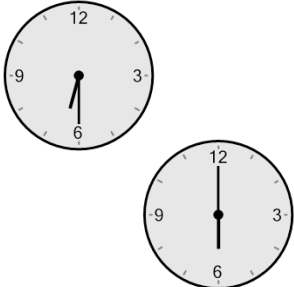
Learn online: [app.mobius.academy/math/units/time\\_elapsed\\_negative\\_intro/](http://app.mobius.academy/math/units/time_elapsed_negative_intro/)

**1** How many minutes earlier is the second clock?



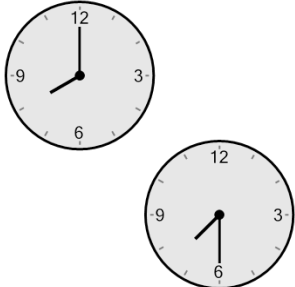
<b>a</b> 45 min	<b>b</b> 15 min
<b>c</b> 30 min	<b>d</b> 0 min
<b>e</b> 90 min	<b>f</b> 60 min

**2** How many minutes earlier is the second clock?



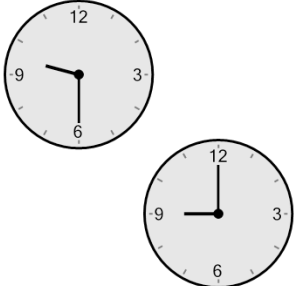
<b>a</b> 0 min	<b>b</b> 15 min
<b>c</b> 60 min	<b>d</b> 75 min
<b>e</b> 105 min	<b>f</b> 30 min

**3** How many minutes earlier is the second clock?



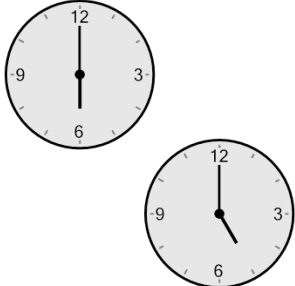
<b>a</b> 45 min	<b>b</b> 180 min
<b>c</b> 90 min	<b>d</b> 30 min
<b>e</b> 150 min	<b>f</b> 15 min

**4** How many minutes earlier is the second clock?



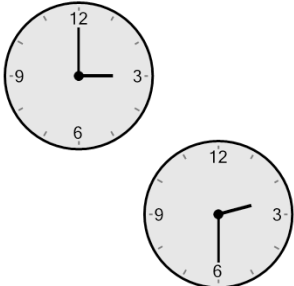
<b>a</b> 60 min	<b>b</b> 45 min
<b>c</b> 0 min	<b>d</b> 30 min
<b>e</b> 105 min	<b>f</b> 90 min

**5** How many minutes earlier is the second clock?



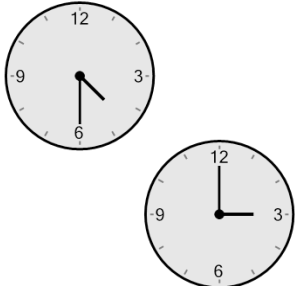
<b>a</b> 0 min	<b>b</b> 120 min
<b>c</b> 165 min	<b>d</b> 60 min
<b>e</b> 15 min	<b>f</b> 240 min

**6** How many minutes earlier is the second clock?



<b>a</b> 150 min	<b>b</b> 90 min
<b>c</b> 45 min	<b>d</b> 15 min
<b>e</b> 30 min	<b>f</b> 60 min

**7** How many minutes earlier is the second clock?



<b>a</b> 30 min	<b>b</b> 90 min
<b>c</b> 120 min	<b>d</b> 15 min
<b>e</b> 180 min	<b>f</b> 0 min