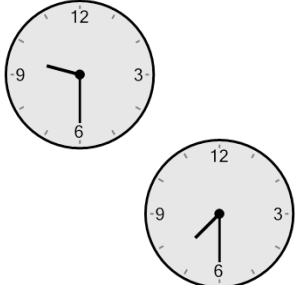




Math worksheet on 'Time - Elapsed Negative - Two Clocks To Minutes - Half Hours (Level 3)'. Part of a broader unit on 'Time - Elapsed Time, Negative - Intro'

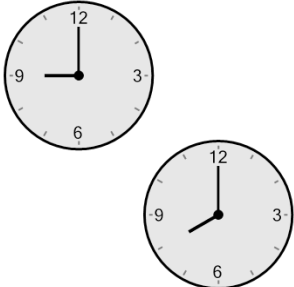
Learn online: app.mobius.academy/math/units/time_elapsed_negative_intro/

1 How many minutes earlier is the second clock?




a 15 min	b 30 min
c 300 min	d 0 min
e 120 min	f 60 min

2 How many minutes earlier is the second clock?



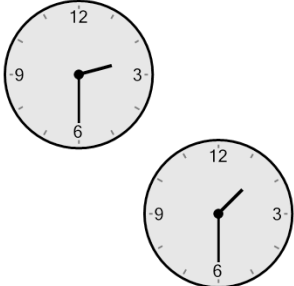
a 240 min	b 60 min
c 135 min	d 90 min
e 45 min	f 120 min

3 How many minutes earlier is the second clock?



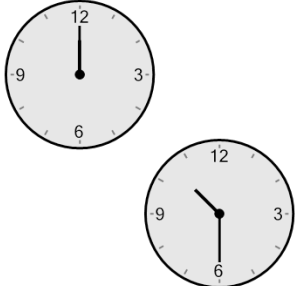
a 150 min	b 90 min
c 195 min	d 0 min
e 15 min	f 30 min

4 How many minutes earlier is the second clock?



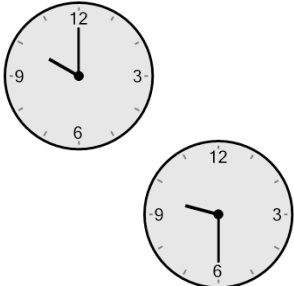
a 0 min	b 120 min
c 60 min	d 150 min
e 75 min	f 240 min

5 How many minutes earlier is the second clock?



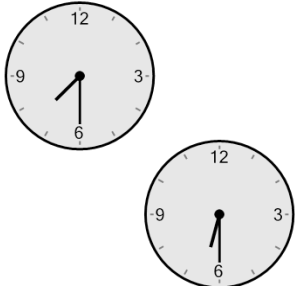
a 195 min	b 120 min
c 180 min	d 60 min
e 90 min	f 240 min

6 How many minutes earlier is the second clock?



a 60 min	b 75 min
c 30 min	d 90 min
e 180 min	f 135 min

7 How many minutes earlier is the second clock?



a 120 min	b 15 min
c 45 min	d 60 min
e 180 min	f 0 min