




Math worksheet on 'Time - Elapsed Negative - Two Clocks To Minutes - One Minutes (Level 1)'. Part of a broader unit on 'Time - Elapsed Time, Negative - Intro'

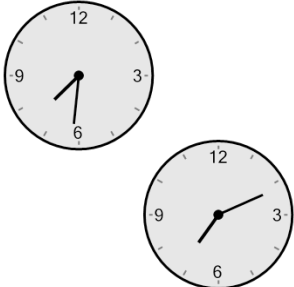
Learn online: [app.mobius.academy/math/units/time\\_elapsed\\_negative\\_intro/](http://app.mobius.academy/math/units/time_elapsed_negative_intro/)

**1** How many minutes earlier is the second clock?



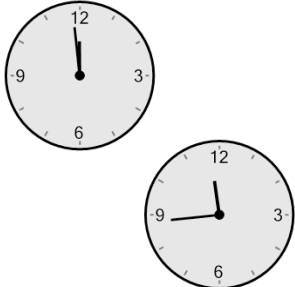
|                    |                    |
|--------------------|--------------------|
| <b>a</b><br>74 min | <b>b</b><br>59 min |
| <b>c</b><br>46 min | <b>d</b><br>89 min |
| <b>e</b><br>31 min | <b>f</b><br>14 min |

**2** How many minutes earlier is the second clock?




|                    |                     |
|--------------------|---------------------|
| <b>a</b><br>5 min  | <b>b</b><br>20 min  |
| <b>c</b><br>70 min | <b>d</b><br>110 min |
| <b>e</b><br>85 min | <b>f</b><br>80 min  |

**3** How many minutes earlier is the second clock?




|                    |                    |
|--------------------|--------------------|
| <b>a</b><br>30 min | <b>b</b><br>0 min  |
| <b>c</b><br>75 min | <b>d</b><br>15 min |
| <b>e</b><br>45 min | <b>f</b><br>60 min |

**4** How many minutes earlier is the second clock?




|                     |                    |
|---------------------|--------------------|
| <b>a</b><br>105 min | <b>b</b><br>75 min |
| <b>c</b><br>60 min  | <b>d</b><br>30 min |
| <b>e</b><br>90 min  | <b>f</b><br>15 min |

**5** How many minutes earlier is the second clock?



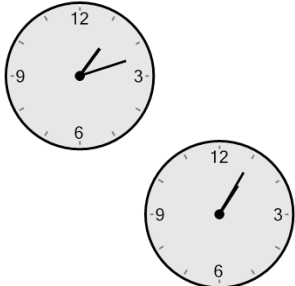
|                    |                    |
|--------------------|--------------------|
| <b>a</b><br>36 min | <b>b</b><br>54 min |
| <b>c</b><br>96 min | <b>d</b><br>81 min |
| <b>e</b><br>21 min | <b>f</b><br>39 min |

**6** How many minutes earlier is the second clock?



|                    |                    |
|--------------------|--------------------|
| <b>a</b><br>77 min | <b>b</b><br>13 min |
| <b>c</b><br>2 min  | <b>d</b><br>47 min |
| <b>e</b><br>17 min | <b>f</b><br>62 min |

**7** How many minutes earlier is the second clock?



|                    |                    |
|--------------------|--------------------|
| <b>a</b><br>98 min | <b>b</b><br>22 min |
| <b>c</b><br>38 min | <b>d</b><br>97 min |
| <b>e</b><br>83 min | <b>f</b><br>7 min  |