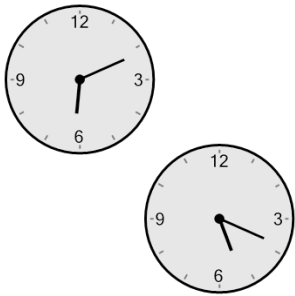




Math worksheet on 'Time - Elapsed Negative - Two Clocks To Minutes - One Minutes (Level 2)'. Part of a broader unit on 'Time - Elapsed Time, Negative - Practice'

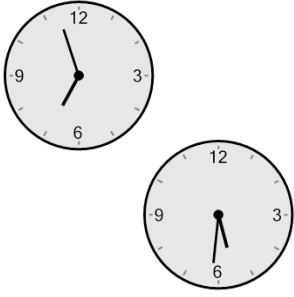
Learn online: app.mobius.academy/math/units/time_elapsed_negative_practice/

1 How many minutes earlier is the second clock?



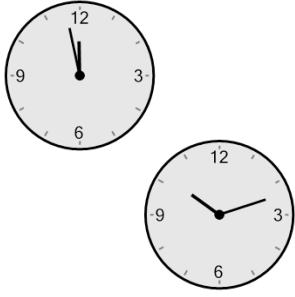
| | |
|---------------------|--------------------|
| a 112 min | b 97 min |
| c 142 min | d 52 min |
| e 37 min | f 38 min |

2 How many minutes earlier is the second clock?



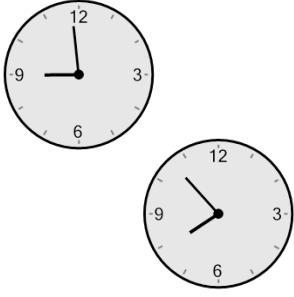
| | |
|--------------------|---------------------|
| a 41 min | b 116 min |
| c 4 min | d 86 min |
| e 71 min | f 131 min |

3 How many minutes earlier is the second clock?



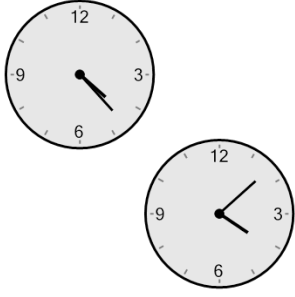
| | |
|---------------------|---------------------|
| a 106 min | b 76 min |
| c 196 min | d 166 min |
| e 31 min | f 211 min |

4 How many minutes earlier is the second clock?



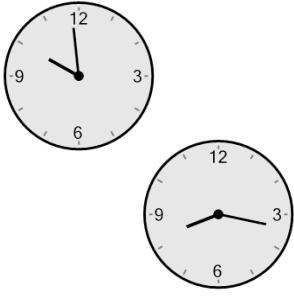
| | |
|---------------------|--------------------|
| a 126 min | b 9 min |
| c 111 min | d 66 min |
| e 39 min | f 96 min |

5 How many minutes earlier is the second clock?



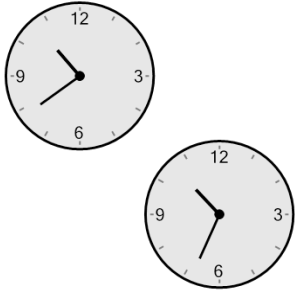
| | |
|--------------------|---------------------|
| a 75 min | b 105 min |
| c 90 min | d 45 min |
| e 60 min | f 15 min |

6 How many minutes earlier is the second clock?



| | |
|---------------------|---------------------|
| a 27 min | b 57 min |
| c 132 min | d 72 min |
| e 117 min | f 102 min |

7 How many minutes earlier is the second clock?



| | |
|---------------------|--------------------|
| a 100 min | b 5 min |
| c 10 min | d 40 min |
| e 80 min | f 55 min |