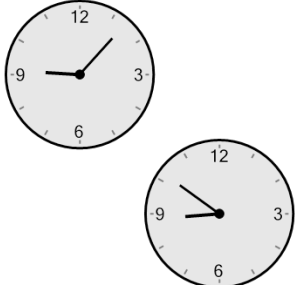




Math worksheet on 'Time - Elapsed Negative - Two Clocks To Minutes - One Minutes (Level 3)'. Part of a broader unit on 'Time - Elapsed Time, Negative - Advanced'


Learn online: app.mobius.academy/math/units/time_elapsed_negative_advanced/

1 How many minutes earlier is the second clock?




| | | | |
|----------|---------|----------|--------|
| a | 91 min | b | 16 min |
| c | 76 min | d | 1 min |
| e | 121 min | f | 74 min |

2 How many minutes earlier is the second clock?




| | | | |
|----------|--------|----------|---------|
| a | 75 min | b | 105 min |
| c | 90 min | d | 120 min |
| e | 30 min | f | 15 min |

3 How many minutes earlier is the second clock?




| | | | |
|----------|---------|----------|---------|
| a | 79 min | b | 34 min |
| c | 49 min | d | 154 min |
| e | 184 min | f | 19 min |

4 How many minutes earlier is the second clock?



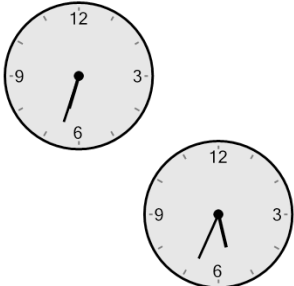
| | | | |
|----------|---------|----------|---------|
| a | 70 min | b | 115 min |
| c | 55 min | d | 5 min |
| e | 130 min | f | 100 min |

5 How many minutes earlier is the second clock?




| | | | |
|----------|---------|----------|--------|
| a | 36 min | b | 81 min |
| c | 66 min | d | 51 min |
| e | 156 min | f | 9 min |

6 How many minutes earlier is the second clock?



| | | | |
|----------|---------|----------|---------|
| a | 46 min | b | 89 min |
| c | 59 min | d | 44 min |
| e | 104 min | f | 134 min |

7 How many minutes earlier is the second clock?



| | | | |
|----------|---------|----------|--------|
| a | 126 min | b | 81 min |
| c | 54 min | d | 21 min |
| e | 111 min | f | 51 min |