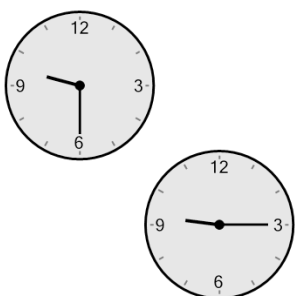




Math worksheet on 'Time - Elapsed Negative - Two Clocks To Minutes - Quarter Hours (Level 1)'. Part of a broader unit on 'Time - Elapsed Time, Negative - Intro'

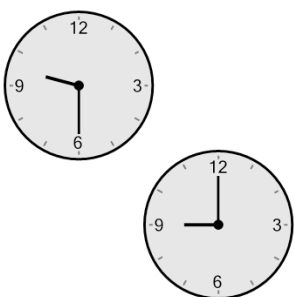
Learn online: app.mobius.academy/math/units/time_elapsed_negative_intro/

1 How many minutes earlier is the second clock?




a 15 min	b 75 min
c 60 min	d 105 min
e 0 min	f 90 min

2 How many minutes earlier is the second clock?




a 135 min	b 30 min
c 15 min	d 180 min
e 105 min	f 120 min

3 How many minutes earlier is the second clock?



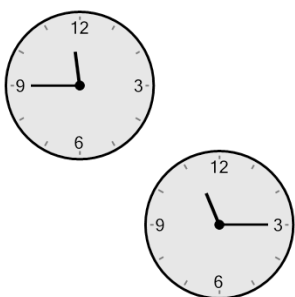
a 0 min	b 30 min
c 15 min	d 90 min
e 60 min	f 75 min

4 How many minutes earlier is the second clock?



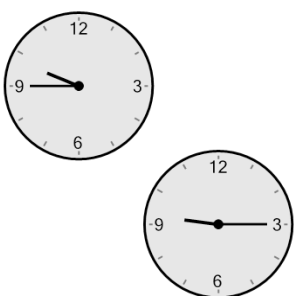
a 90 min	b 75 min
c 60 min	d 30 min
e 180 min	f 0 min

5 How many minutes earlier is the second clock?



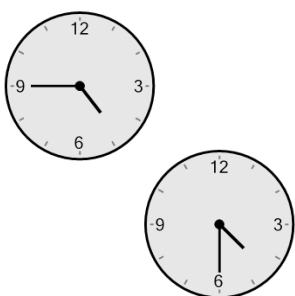
a 0 min	b 90 min
c 105 min	d 30 min
e 180 min	f 60 min

6 How many minutes earlier is the second clock?



a 0 min	b 105 min
c 30 min	d 45 min
e 60 min	f 75 min

7 How many minutes earlier is the second clock?



a 90 min	b 75 min
c 15 min	d 30 min
e 45 min	f 105 min