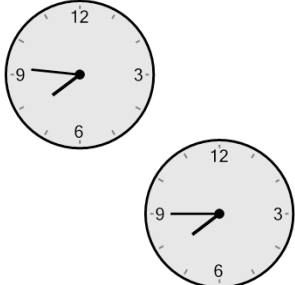




Math worksheet on 'Time - Elapsed Negative - Two Clocks To Minutes - Quarter Hours (Level 2)'. Part of a broader unit on 'Time - Elapsed Time, Negative - Practice'

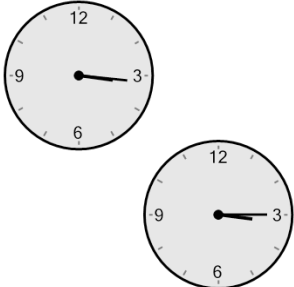
Learn online: app.mobius.academy/math/units/time_elapsed_negative_practice/

1 How many minutes earlier is the second clock?



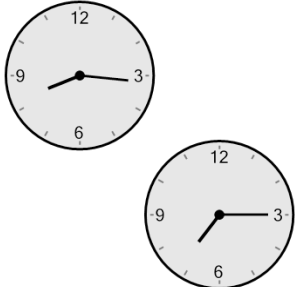
| | |
|--------------------|---------------------|
| a 1 min | b 14 min |
| c 74 min | d 104 min |
| e 46 min | f 59 min |

2 How many minutes earlier is the second clock?




| | |
|--------------------|--------------------|
| a 89 min | b 1 min |
| c 59 min | d 44 min |
| e 46 min | f 16 min |

3 How many minutes earlier is the second clock?



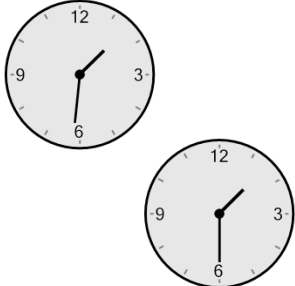
| | |
|---------------------|--------------------|
| a 44 min | b 1 min |
| c 91 min | d 61 min |
| e 136 min | f 76 min |

4 How many minutes earlier is the second clock?



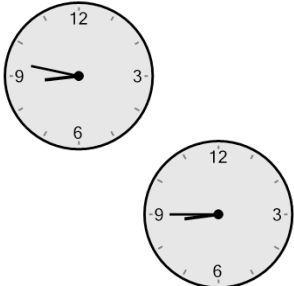
| | |
|---------------------|---------------------|
| a 27 min | b 93 min |
| c 63 min | d 138 min |
| e 108 min | f 153 min |

5 How many minutes earlier is the second clock?



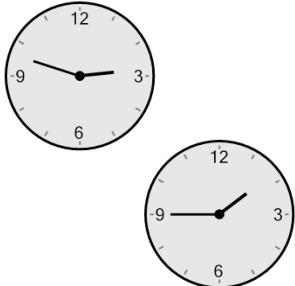
| | |
|--------------------|---------------------|
| a 91 min | b 104 min |
| c 1 min | d 61 min |
| e 31 min | f 44 min |

6 How many minutes earlier is the second clock?



| | |
|--------------------|--------------------|
| a 43 min | b 2 min |
| c 77 min | d 88 min |
| e 58 min | f 28 min |

7 How many minutes earlier is the second clock?



| | |
|---------------------|--------------------|
| a 48 min | b 42 min |
| c 153 min | d 63 min |
| e 33 min | f 78 min |