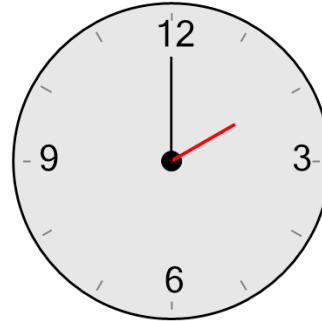




Math worksheet on 'Time - Telling - Hour Hand to Hour - Full Hours (Level 1)'. Part of a broader unit on 'Time - Telling - Intro'

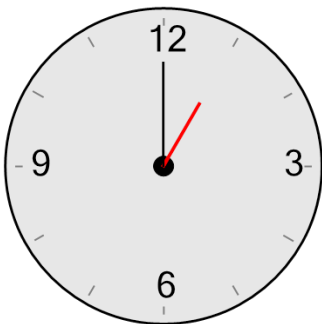
Learn online: [app.mobius.academy/math/units/time\\_telling\\_intro/](http://app.mobius.academy/math/units/time_telling_intro/)

**1** What hour is the hour hand (small hand) pointing to?



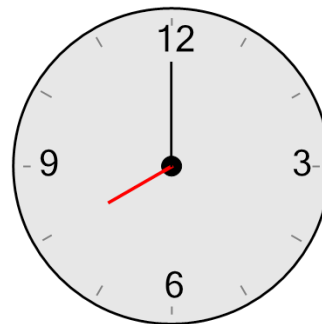
- |                     |                     |
|---------------------|---------------------|
| <b>a</b><br>6 hours | <b>b</b><br>2 hours |
| <b>c</b><br>5 hours | <b>d</b><br>8 hours |
| <b>e</b><br>7 hours | <b>f</b><br>9 hours |

**2** What hour is the hour hand (small hand) pointing to?



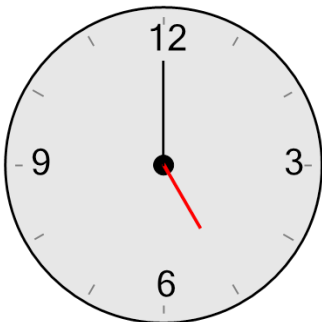
- |                      |                     |
|----------------------|---------------------|
| <b>a</b><br>5 hours  | <b>b</b><br>4 hours |
| <b>c</b><br>9 hours  | <b>d</b><br>7 hours |
| <b>e</b><br>11 hours | <b>f</b><br>1 hours |

**3** What hour is the hour hand (small hand) pointing to?



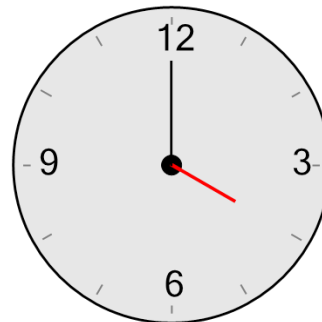
- |                      |                      |
|----------------------|----------------------|
| <b>a</b><br>11 hours | <b>b</b><br>8 hours  |
| <b>c</b><br>2 hours  | <b>d</b><br>12 hours |
| <b>e</b><br>7 hours  | <b>f</b><br>3 hours  |

**4** What hour is the hour hand (small hand) pointing to?



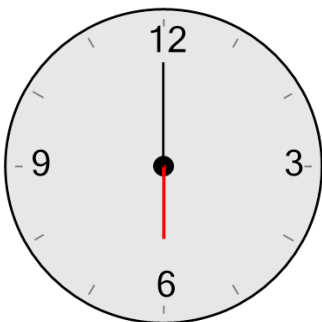
- |                     |                      |
|---------------------|----------------------|
| <b>a</b><br>9 hours | <b>b</b><br>2 hours  |
| <b>c</b><br>1 hours | <b>d</b><br>10 hours |
| <b>e</b><br>7 hours | <b>f</b><br>5 hours  |

**5** What hour is the hour hand (small hand) pointing to?



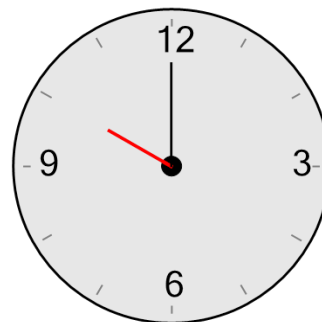
- |                      |                     |
|----------------------|---------------------|
| <b>a</b><br>11 hours | <b>b</b><br>4 hours |
| <b>c</b><br>3 hours  | <b>d</b><br>1 hours |
| <b>e</b><br>6 hours  | <b>f</b><br>2 hours |

**6** What hour is the hour hand (small hand) pointing to?



- |                     |                      |
|---------------------|----------------------|
| <b>a</b><br>8 hours | <b>b</b><br>2 hours  |
| <b>c</b><br>6 hours | <b>d</b><br>9 hours  |
| <b>e</b><br>4 hours | <b>f</b><br>11 hours |

**7** What hour is the hour hand (small hand) pointing to?



- |                      |                     |
|----------------------|---------------------|
| <b>a</b><br>10 hours | <b>b</b><br>4 hours |
| <b>c</b><br>6 hours  | <b>d</b><br>7 hours |
| <b>e</b><br>3 hours  | <b>f</b><br>5 hours |