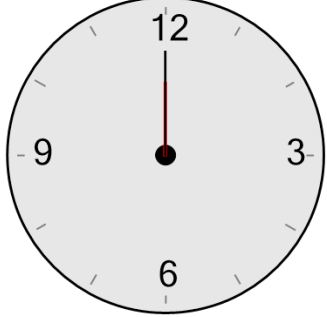




Math worksheet on 'Time - Telling - Hour Hand to Hour - Half Hours (Level 1)'. Part of a broader unit on 'Time - Telling - Intro'

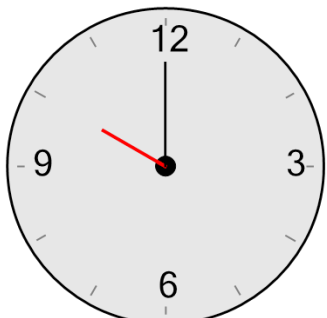
Learn online: app.mobius.academy/math/units/time_telling_intro/

1 What hour is the hour hand (small hand) pointing to?



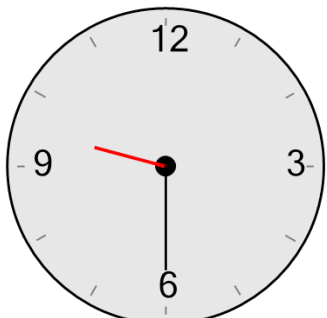
| | |
|----------------------|---------------------|
| a 10 hours | b 2 hours |
| c 5 hours | d 6 hours |
| e 12 hours | f 8 hours |

2 What hour is the hour hand (small hand) pointing to?



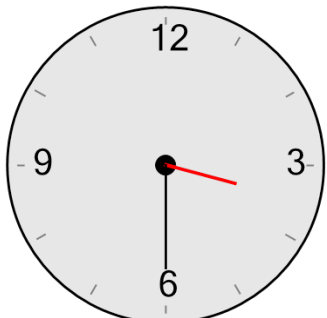
| | |
|----------------------|----------------------|
| a 1 hours | b 4 hours |
| c 3 hours | d 12 hours |
| e 10 hours | f 5 hours |

3 What hour is the hour hand (small hand) just past?



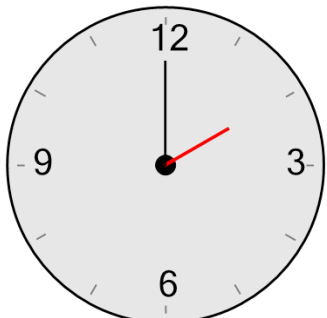
| | |
|----------------------|---------------------|
| a 12 hours | b 6 hours |
| c 8 hours | d 9 hours |
| e 1 hours | f 2 hours |

4 What hour is the hour hand (small hand) just past?



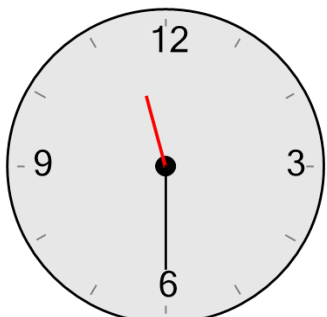
| | |
|----------------------|----------------------|
| a 11 hours | b 10 hours |
| c 3 hours | d 7 hours |
| e 6 hours | f 2 hours |

5 What hour is the hour hand (small hand) pointing to?



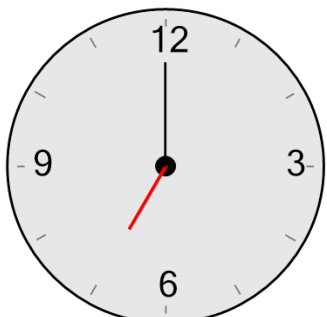
| | |
|----------------------|---------------------|
| a 12 hours | b 6 hours |
| c 2 hours | d 9 hours |
| e 11 hours | f 7 hours |

6 What hour is the hour hand (small hand) just past?



| | |
|----------------------|---------------------|
| a 11 hours | b 5 hours |
| c 10 hours | d 9 hours |
| e 1 hours | f 2 hours |

7 What hour is the hour hand (small hand) pointing to?



| | |
|----------------------|---------------------|
| a 4 hours | b 9 hours |
| c 10 hours | d 7 hours |
| e 12 hours | f 1 hours |