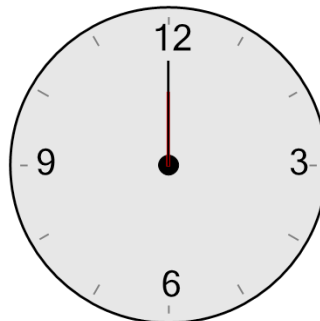




Math worksheet on 'Time - Telling - Hour Hand to Hour - Quarter Hours (Level 1)'. Part of a broader unit on 'Time - Telling - Intro'

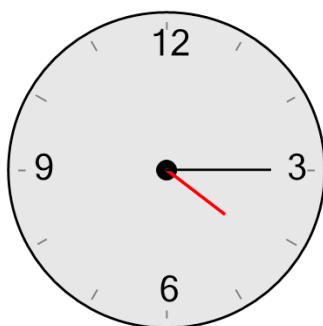
Learn online: app.mobius.academy/math/units/time_telling_intro/

1 What hour is the hour hand (small hand) pointing to?



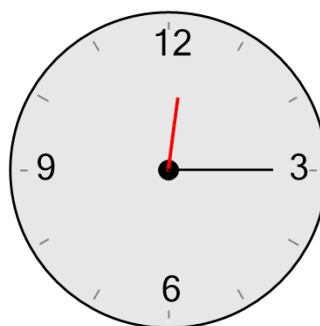
- | | |
|----------------------|---------------------|
| a
7 hours | b
9 hours |
| c
12 hours | d
6 hours |
| e
4 hours | f
8 hours |

2 What hour is the hour hand (small hand) just past?



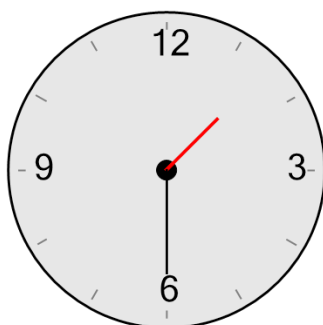
- | | |
|----------------------|---------------------|
| a
3 hours | b
7 hours |
| c
12 hours | d
4 hours |
| e
9 hours | f
1 hours |

3 What hour is the hour hand (small hand) just past?



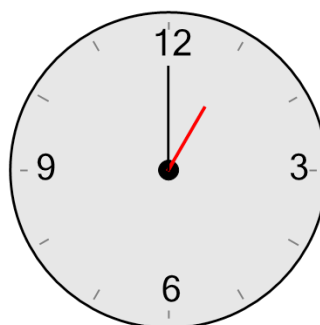
- | | |
|----------------------|----------------------|
| a
10 hours | b
4 hours |
| c
3 hours | d
12 hours |
| e
7 hours | f
5 hours |

4 What hour is the hour hand (small hand) just past?



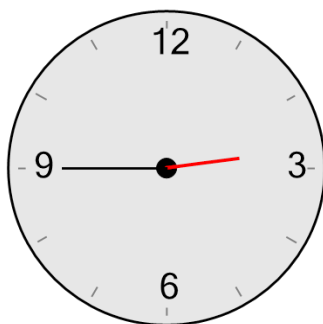
- | | |
|---------------------|----------------------|
| a
3 hours | b
12 hours |
| c
8 hours | d
11 hours |
| e
9 hours | f
1 hours |

5 What hour is the hour hand (small hand) pointing to?



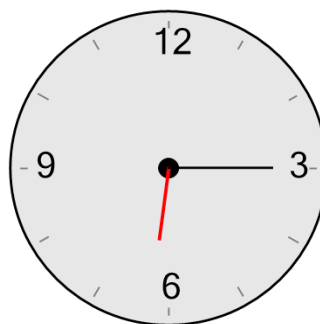
- | | |
|---------------------|----------------------|
| a
1 hours | b
10 hours |
| c
7 hours | d
11 hours |
| e
6 hours | f
12 hours |

6 What hour is the hour hand (small hand) just past?



- | | |
|---------------------|----------------------|
| a
2 hours | b
10 hours |
| c
1 hours | d
6 hours |
| e
9 hours | f
5 hours |

7 What hour is the hour hand (small hand) just past?



- | | |
|---------------------|----------------------|
| a
2 hours | b
9 hours |
| c
6 hours | d
8 hours |
| e
5 hours | f
11 hours |