



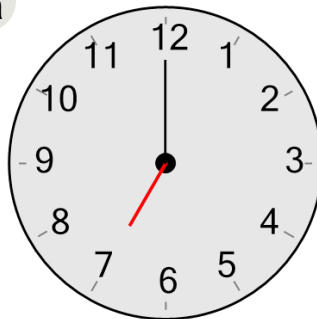
Math worksheet on 'Time - Telling - Hour to Hour Hand - Full Hours (Level 1)'. Part of a broader unit on 'Time - Telling - Intro'

Learn online: app.mobius.academy/math/units/time_telling_intro/

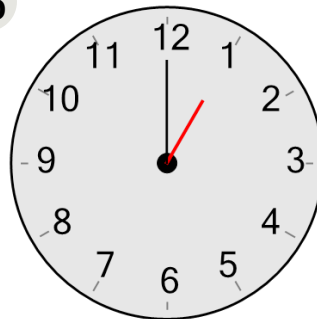
1 Which clock shows this number of hours?

7 hours

a



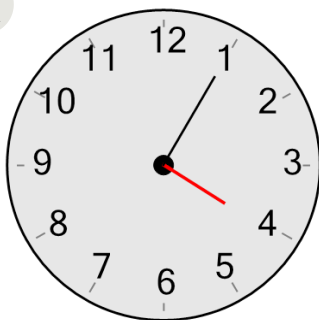
b



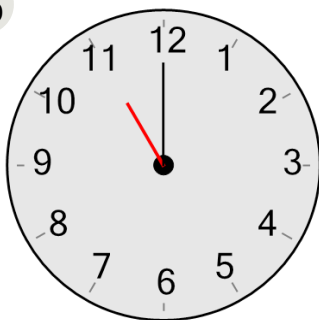
2 Which clock shows this number of hours?

11 hours

a



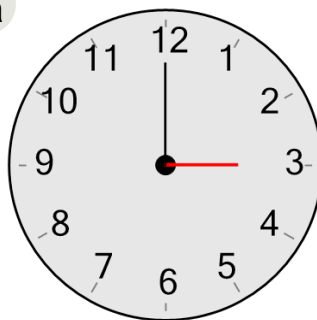
b



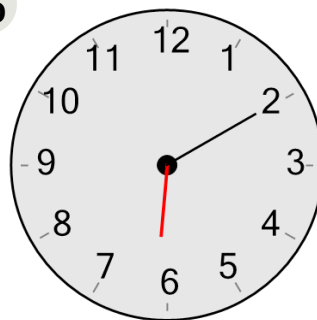
3 Which clock shows this number of hours?

3 hours

a



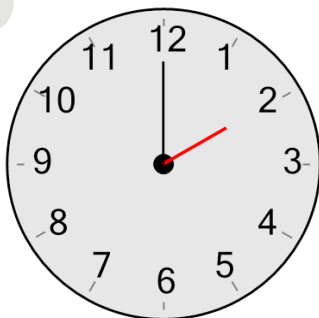
b



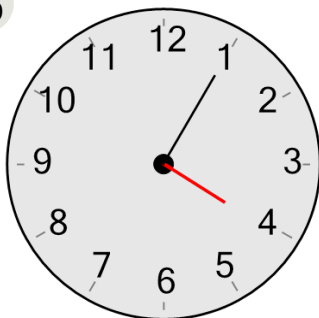
4 Which clock shows this number of hours?

2 hours

a



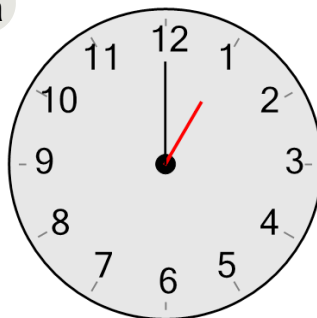
b



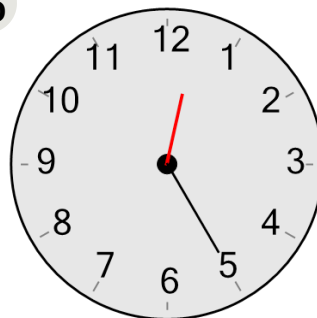
5 Which clock shows this number of hours?

1 hours

a



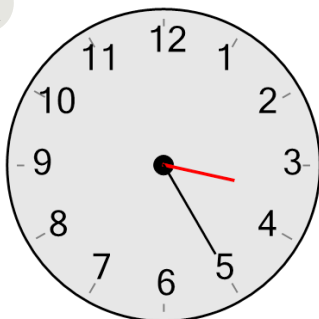
b



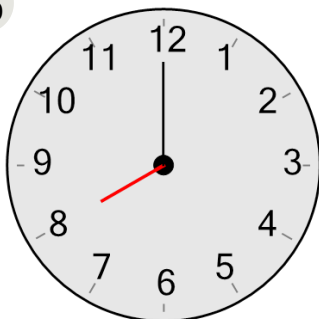
6 Which clock shows this number of hours?

8 hours

a



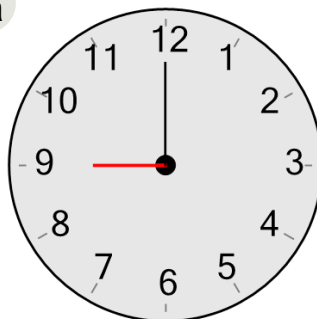
b



7 Which clock shows this number of hours?

9 hours

a



b

