

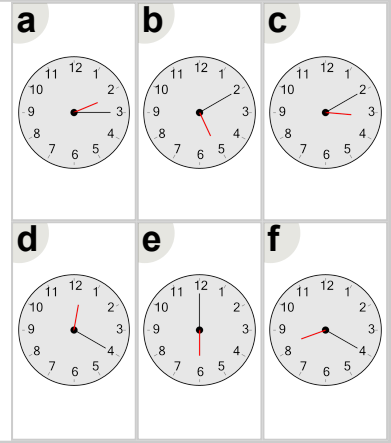


Math worksheet on 'Time - Telling - Hour to Hour Hand - Full Hours (Level 2)'. Part of a broader unit on 'Time - Telling - Intro'

Learn online: [app.mobius.academy/math/units/time\\_telling\\_intro/](http://app.mobius.academy/math/units/time_telling_intro/)

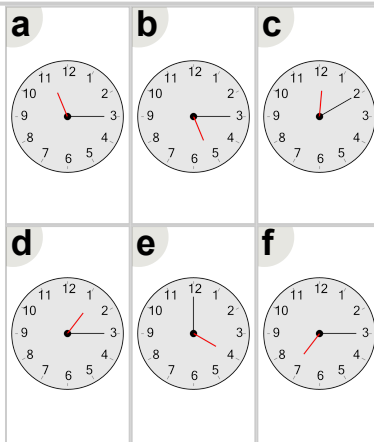
**1** Which clock shows this number of hours?

6 hours



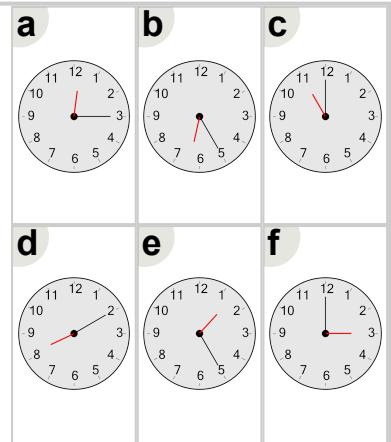
**2** Which clock shows this number of hours?

4 hours



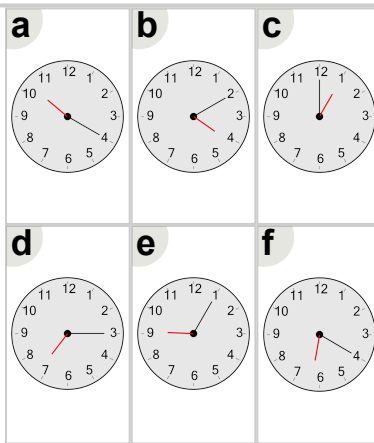
**3** Which clock shows this number of hours?

11 hours



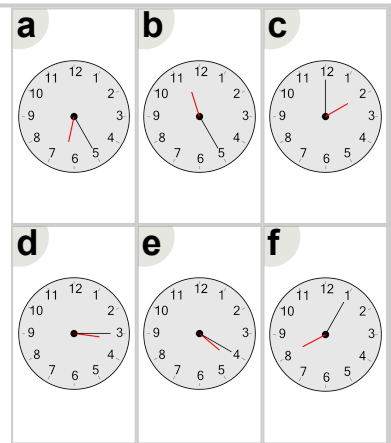
**4** Which clock shows this number of hours?

1 hours



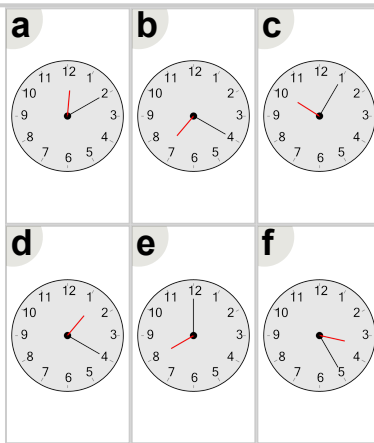
**5** Which clock shows this number of hours?

2 hours



**6** Which clock shows this number of hours?

8 hours



**7** Which clock shows this number of hours?

12 hours

