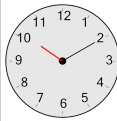
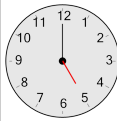
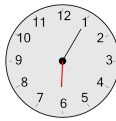
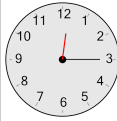


Time - Telling - Hour to Hour Hand - Half Hours

1

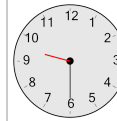
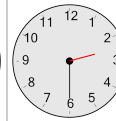
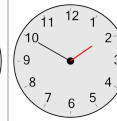
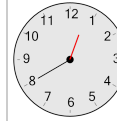
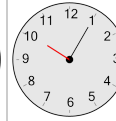
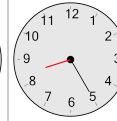
Which clock shows this number of hours?

5 hours

A**B****C****D****E****F****2**

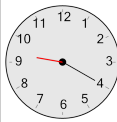
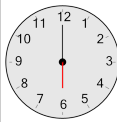
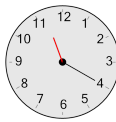
Which clock shows this number of hours?

9 hours

A**B****C****D****E****F****3**

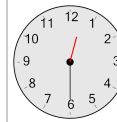
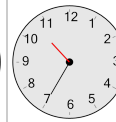
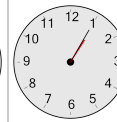
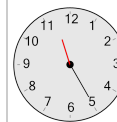
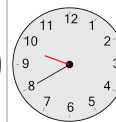
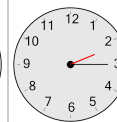
Which clock shows this number of hours?

6 hours

A**B****C****D****E****F****4**

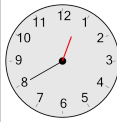
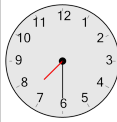
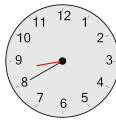
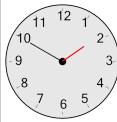
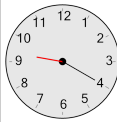
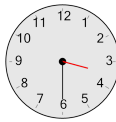
Which clock shows this number of hours?

12 hours

A**B****C****D****E****F****5**

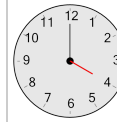
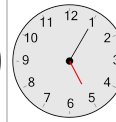
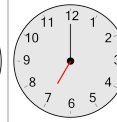
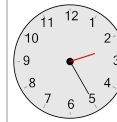
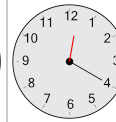
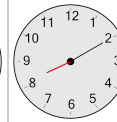
Which clock shows this number of hours?

3 hours

A**B****C****D****E****F****6**

Which clock shows this number of hours?

4 hours

A**B****C****D****E****F****7**

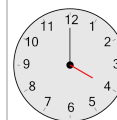
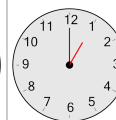
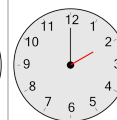
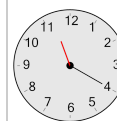
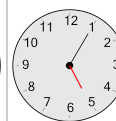
Which clock shows this number of hours?

7 hours

A**B****C****D****E****F****8**

Which clock shows this number of hours?

1 hours

A**B****C****D****E****F**