

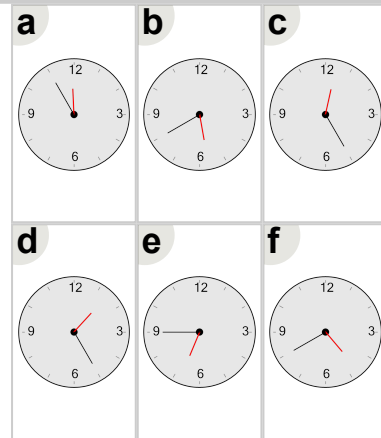


Math worksheet on 'Time - Telling - Hour to Hour Hand - Quarter Hours (Level 1)'. Part of a broader unit on 'Time - Telling - Intro'

Learn online: app.mobius.academy/math/units/time_telling_intro/

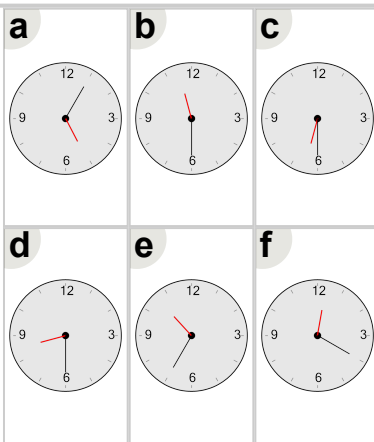
1 Which clock shows this number of hours?

6 hours



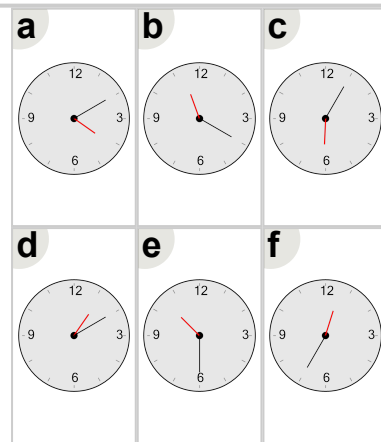
2 Which clock shows this number of hours?

11 hours



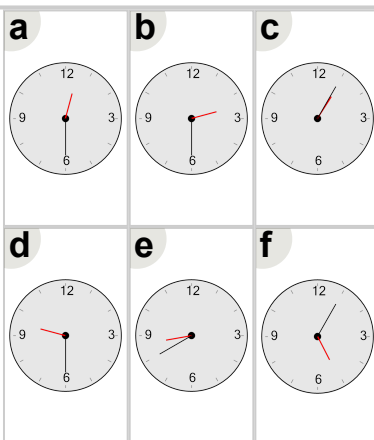
3 Which clock shows this number of hours?

10 hours



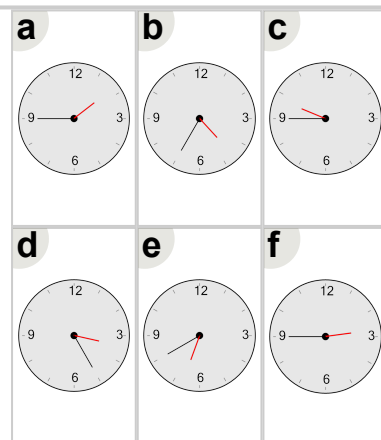
4 Which clock shows this number of hours?

9 hours



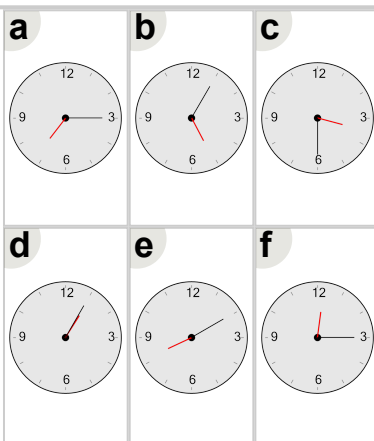
5 Which clock shows this number of hours?

2 hours



6 Which clock shows this number of hours?

7 hours



7 Which clock shows this number of hours?

4 hours

